

CATHOLIC JUNIOR COLLEGE
In preparation for
General Certificate of Education Advanced Level
Higher 2

GEOGRAPHY
Paper 2

9730/02
2 September 2013
3 hours

READ THESE INSTRUCTIONS FIRST

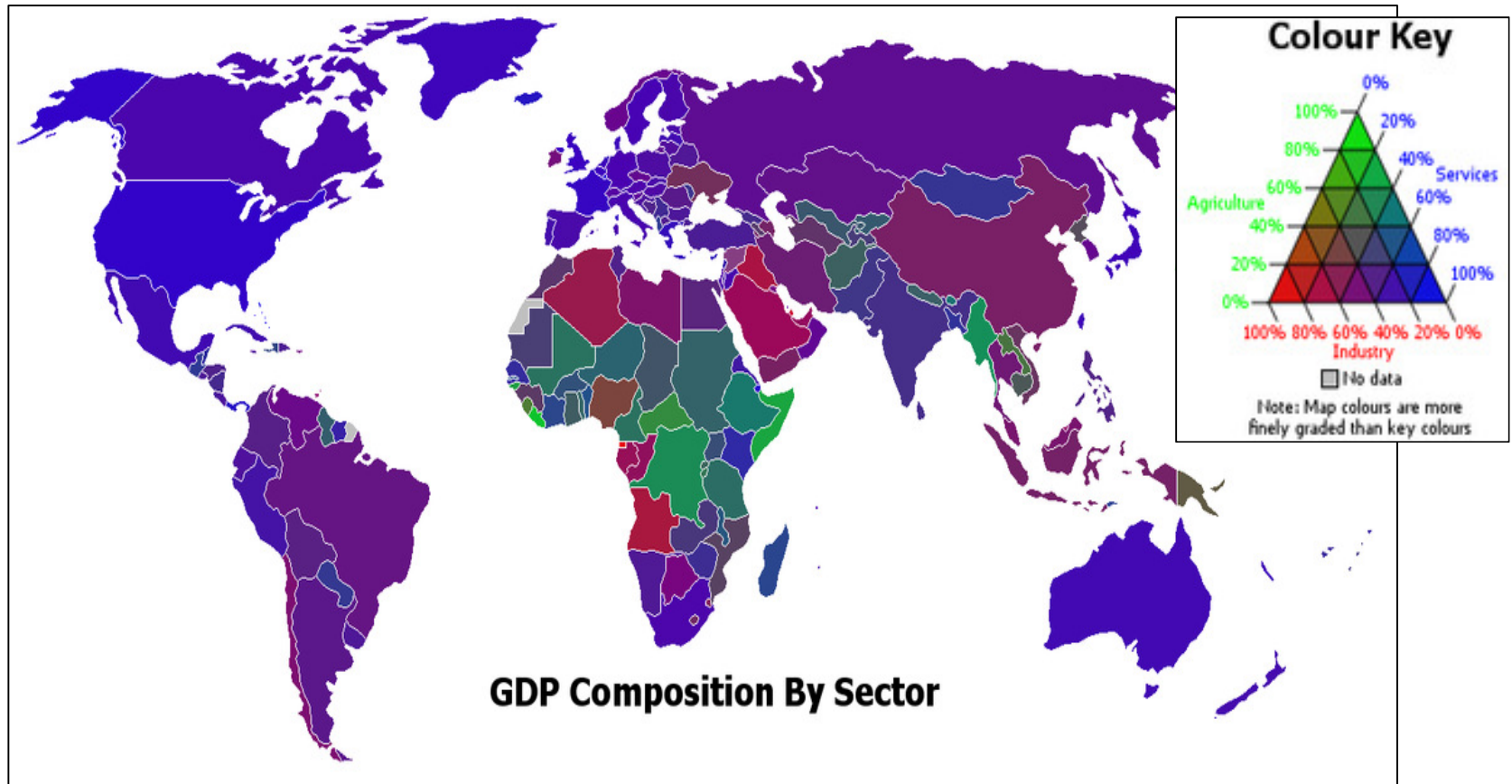
This Insert contains all the Figures referred to in the questions.

This document consists of 6 pages and 2 blank pages.

[Turn over]

BLANK

Figure 1 for Question 1
Gross Domestic Production Composition by Sector



Source: 'Wikimedia Commons' Stephen Morley, 2006.

<http://en.wikipedia.org/wiki/File:Gdp-and-labour-force-by-sector.png> Last accessed 15 Aug 2013

BLANK

Figure 2A Question 2

Population for more developed countries and less developed countries in 1950

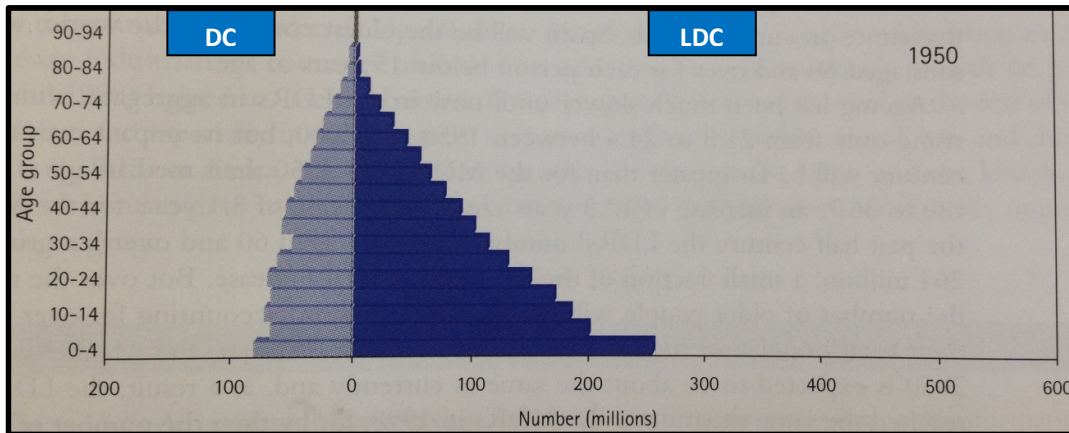


Figure 2B for Question 2

Population for more developed countries and less developed countries in 2000

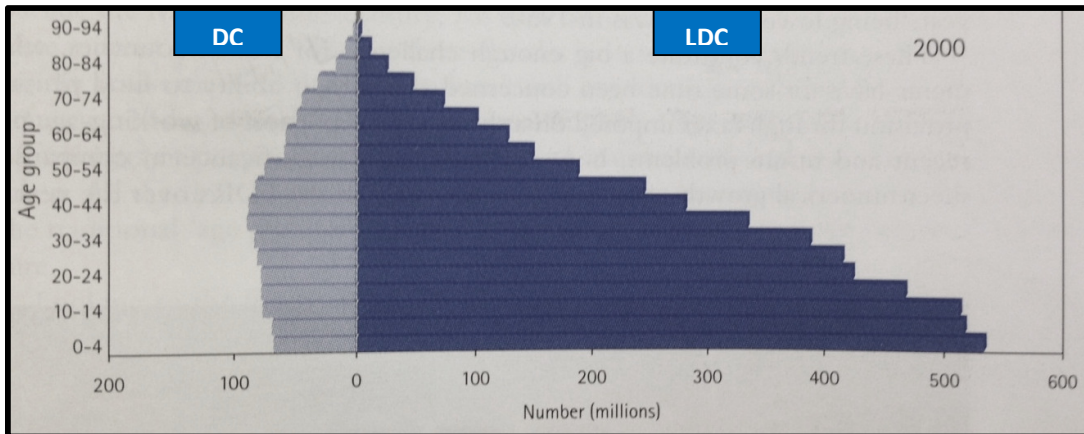
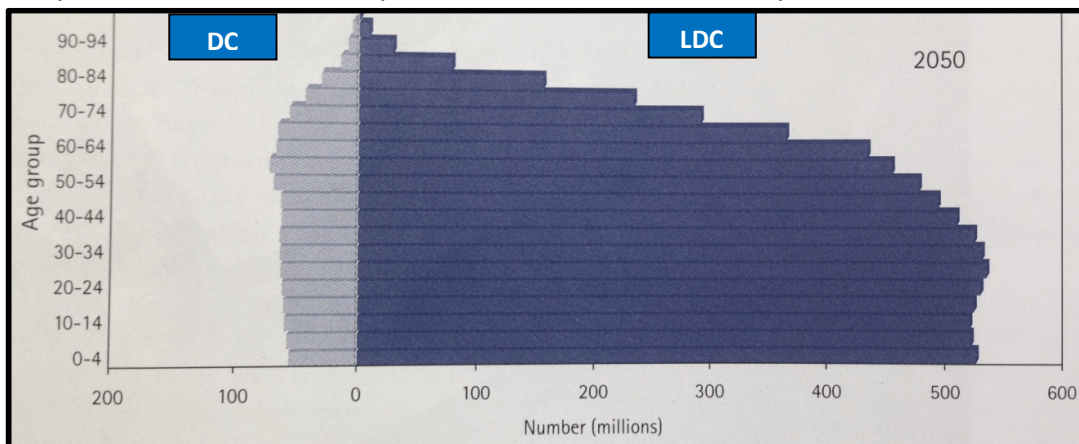


Figure 2C for Question 2

Population for more developed countries and less developed countries in 2050



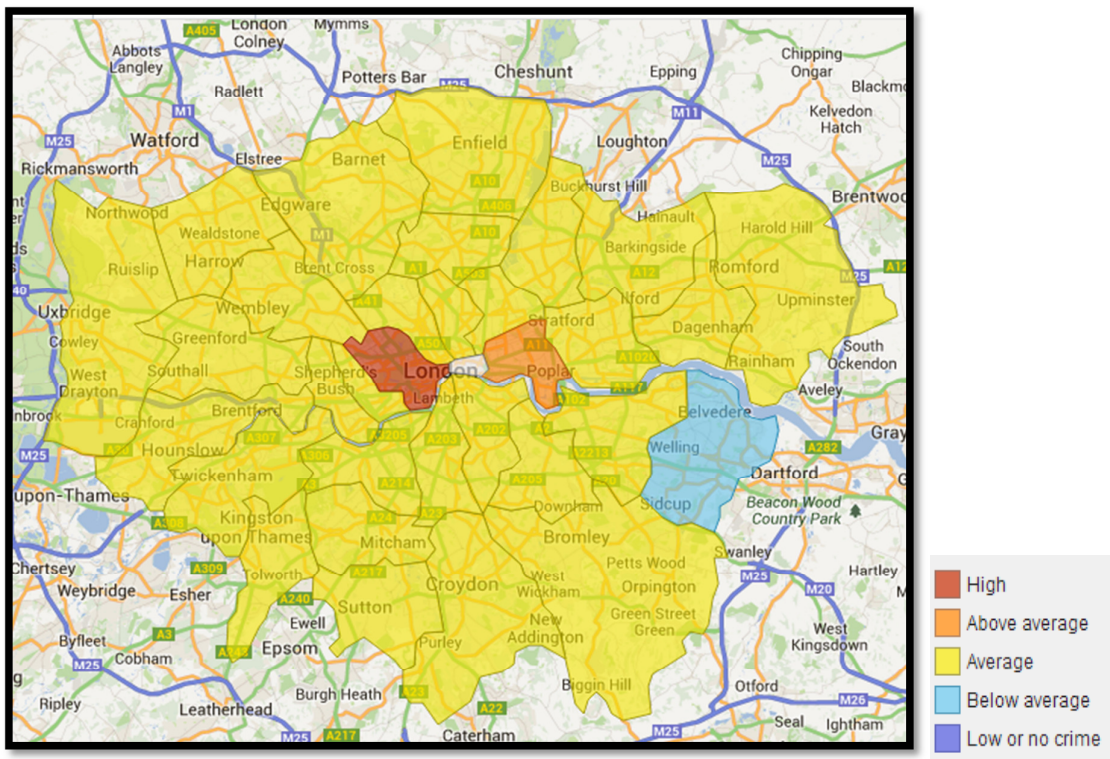
Adapted from: 'Human Geography', Daniels, Bradshaw, Shaw & Sidaway.
(Pearson Education Limited, 2001).

Figure 3 for Question 3
Population and urban change in Asian Countries between 1950 and 2001.

Country	Urban Population 2001 (000)	% of Population in Urban areas (level of urbanisation)			Change in level of urbanisation (%)	
		1950	1990	2001	1950-90	1990 - 2000
China	471, 927	11.0	26.2	36.7	15.2	11.5
Democratic People's Republic of Korea	13, 571	31.0	59.8	60.5	28.8	0.7
Japan	100, 469	50.3	77.2	78.9	26.9	1.7
Republic of Korea	38,830	21.4	73.8	82.5	52.5	8.9

Source: Adapted from 'United Nations World Urbanisation Prospects: The 2001 Revision' (New York: United Nations, 2002)

Figure 4 for Question 4
Map of occurrences of crimes in boroughs in London in July 2013. Crimes include burglary, motor vehicle crime, robbery and violence against the person.



Source: London Metropolitan Police
<http://maps.met.police.uk/> Last accessed: 15 Aug 2013