

Name: _____ ()

Class: _____

PRELIMINARY EXAMINATION
GENERAL CERTIFICATE OF EDUCATION ORDINARY LEVEL

HUMANITIES (GEOGRAPHY)

2260/02

15 August 2024
1 hour 45 minutes

INSERT

READ THESE INSTRUCTIONS FIRST

This Insert contains additional resources referred to in the questions.

This document consists of **10** printed pages and **2** blank pages.



圣尼各拉女校
CHIJ ST. NICHOLAS GIRLS' SCHOOL

Girls of Grace • Women of Strength • Leaders with Heart

[Turn Over

Fig. 1.1 for Question 1

Poster for Community Resilience Day 2022

TAMPINES NORTH COMMUNITY RESILIENCE DAY



Tampines North Community Resilience Day 2022 will allow residents to learn essential life-saving skills on what to do during or upon encountering an emergency situation.

5TH MARCH 2022 SATURDAY **10.00AM TO 11.00AM** **WITH GRASSROOTS ADVISER BAEY YAM KENG**

Successful registrants and attendees will be receiving a food voucher from Tampines North CC. Details to be shared after event.

REGISTRATION FOR ON-SITE*
*Limited to 20pax.



<https://go.gov.sg/tncrd2022-on-site>

(Bus Transport will be provided to and from 2nd SCDF Division HQ. Meeting point details to be shared upon registration via email)

Please note that at times, individuals are required to kneel down when performing CPR + AED training.

REGISTRATION FOR ZOOM



<https://go.gov.sg/tncrd2022-virtual>

There are interactive training components; Learn and Practise from their own homes

Successful registrant will receive zoom details nearer to event date via email.

PROGRAMME



Opening address SG Secure IFAS CPR+AED Demo Fire Extinguisher and Live Wok Demo myResponder App



For more information, please contact Tampines North CC at 67832900.

Organized by: 

Fig. 1.2 for Question 1

Map of Gardens by the Bay



[Turn Over

Fig. 1.5 for Question 1

Map of Bidadari Estate

A tranquil urban oasis

The new 10ha Bidadari Park will form a green lung for the Bidadari estate, which will be completed progressively by 2022. The park will have a lake, heritage walk, open lawns and experiential trails.



LEGEND

- | | |
|--------------------------|----------------|
| Viewing/observation deck | Grassland |
| Open woods | Marshland |
| Ficus-Calophyllum Grove | Bird sanctuary |



Eco-link for park users and wildlife

Up to 13m of the width of the land bridge connecting Bidadari Park and Hillcock Park has been set aside for greenery as an eco-link for fauna.



Encouraging natural play

The Adventure Playwoods, a playground for children, will feature a nest-shaped treehouse.



Rain Tree Island

The new Alkaff Lake will feature a conserved rain tree on its little island in the middle.

PHOTOS: HDB STRAITS TIMES GRAPHICS

Fig. 2.1 for Question 2

Flow of Global Tourism in 2023

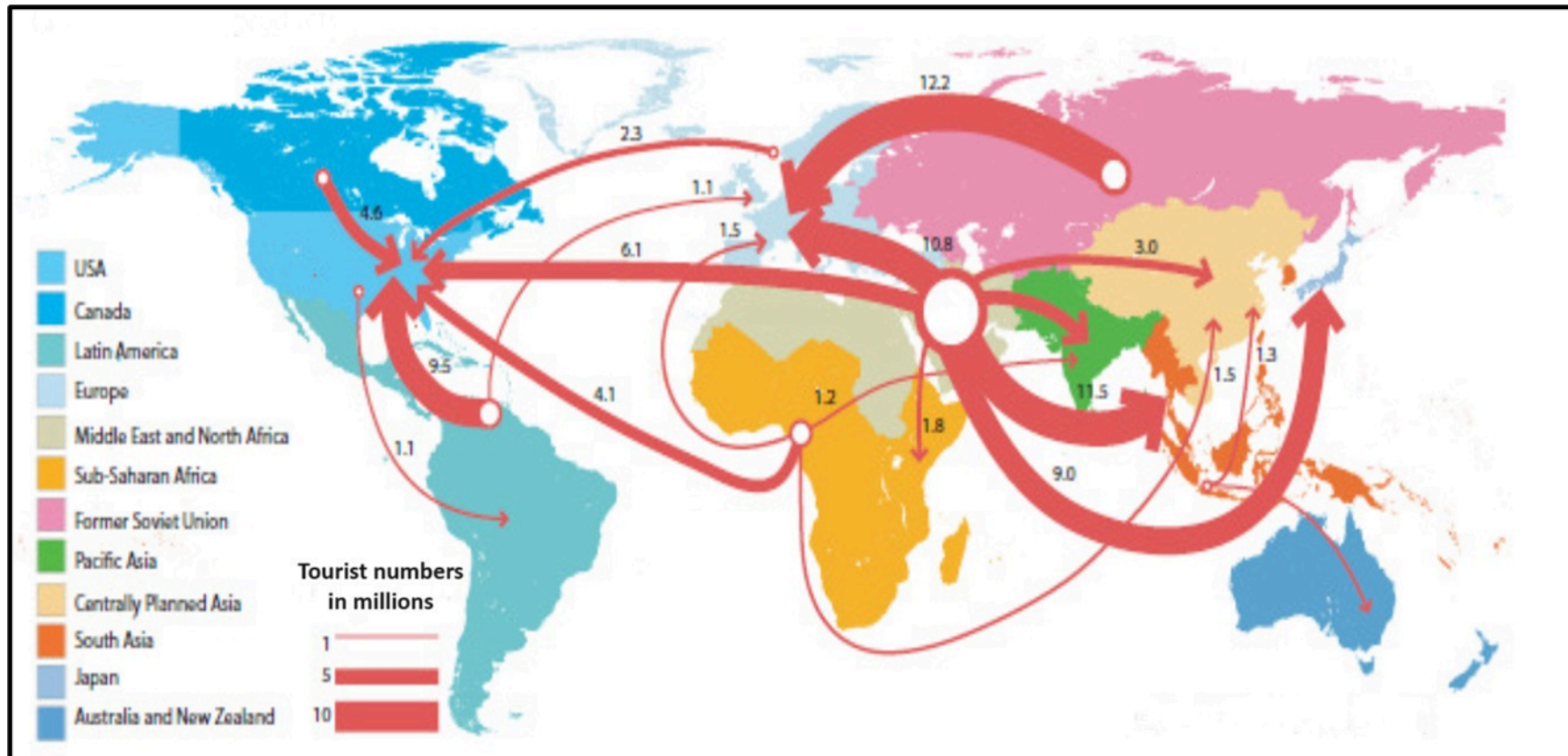


Fig. 2.2 and 2.3 for Question 2

Fig.2.2 Benefits of Ecotourism



Fig. 2.3 Reasons why Ecotourism may fail

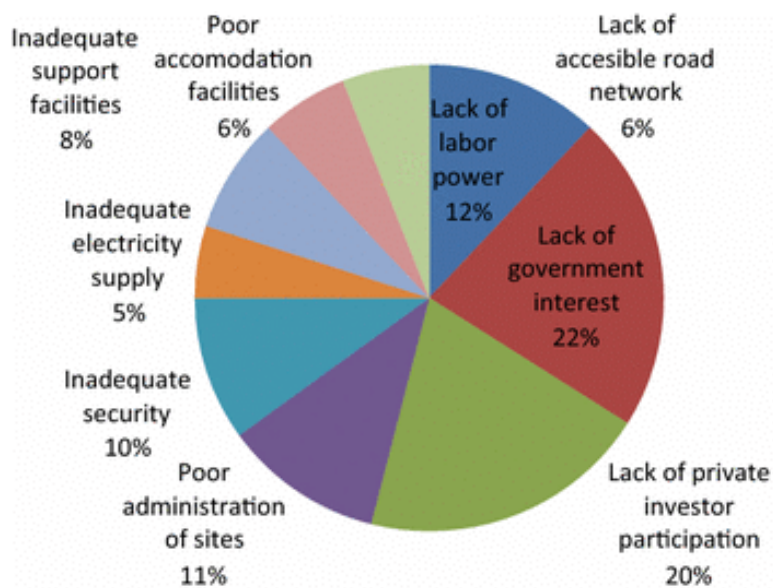
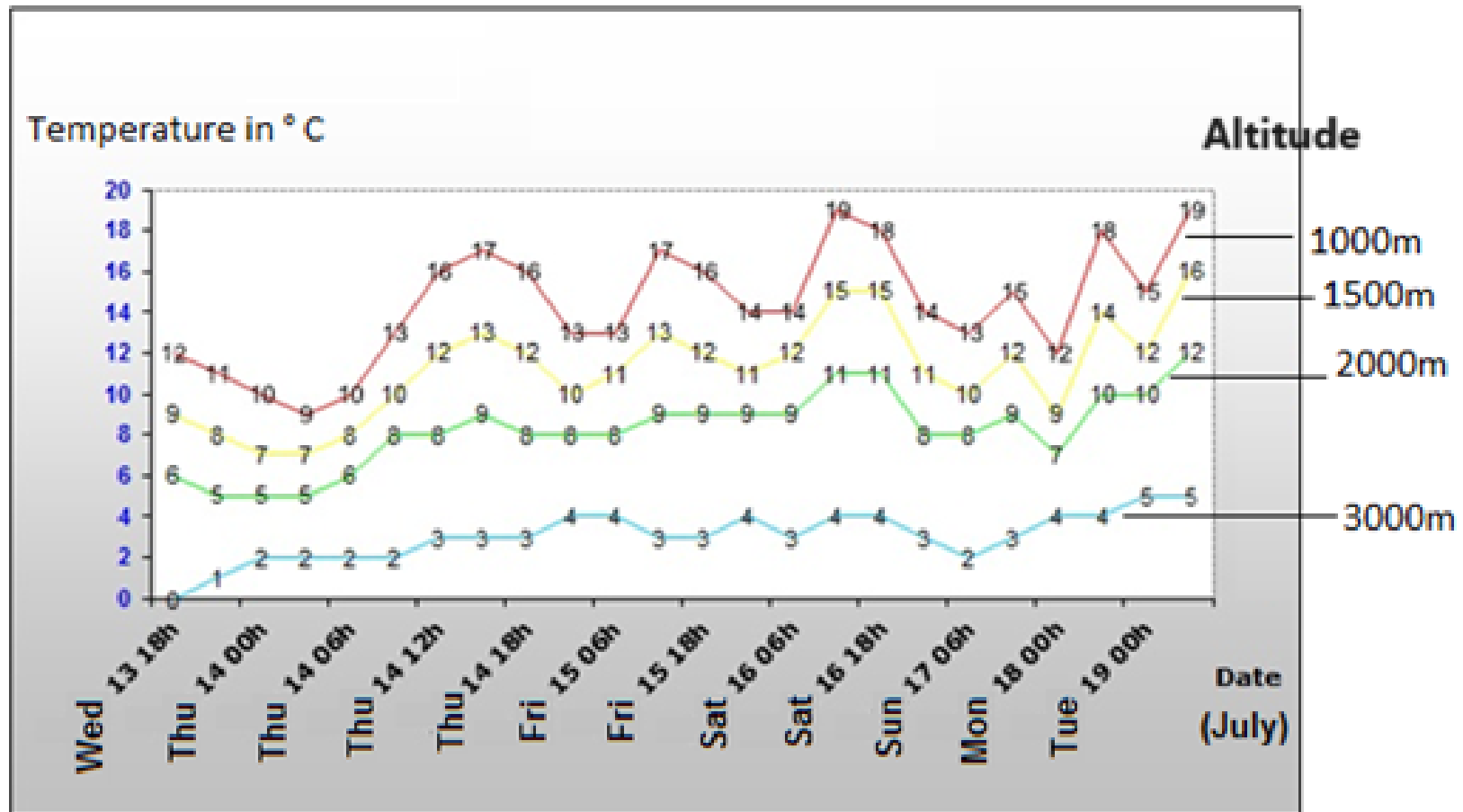


Fig. 3.1 for Question 3

Temperature of various point at Northern Alps



[Turn Over

Fig. 3.2 and 3.3 for Question 3

Fig. 3.2 Human Activity

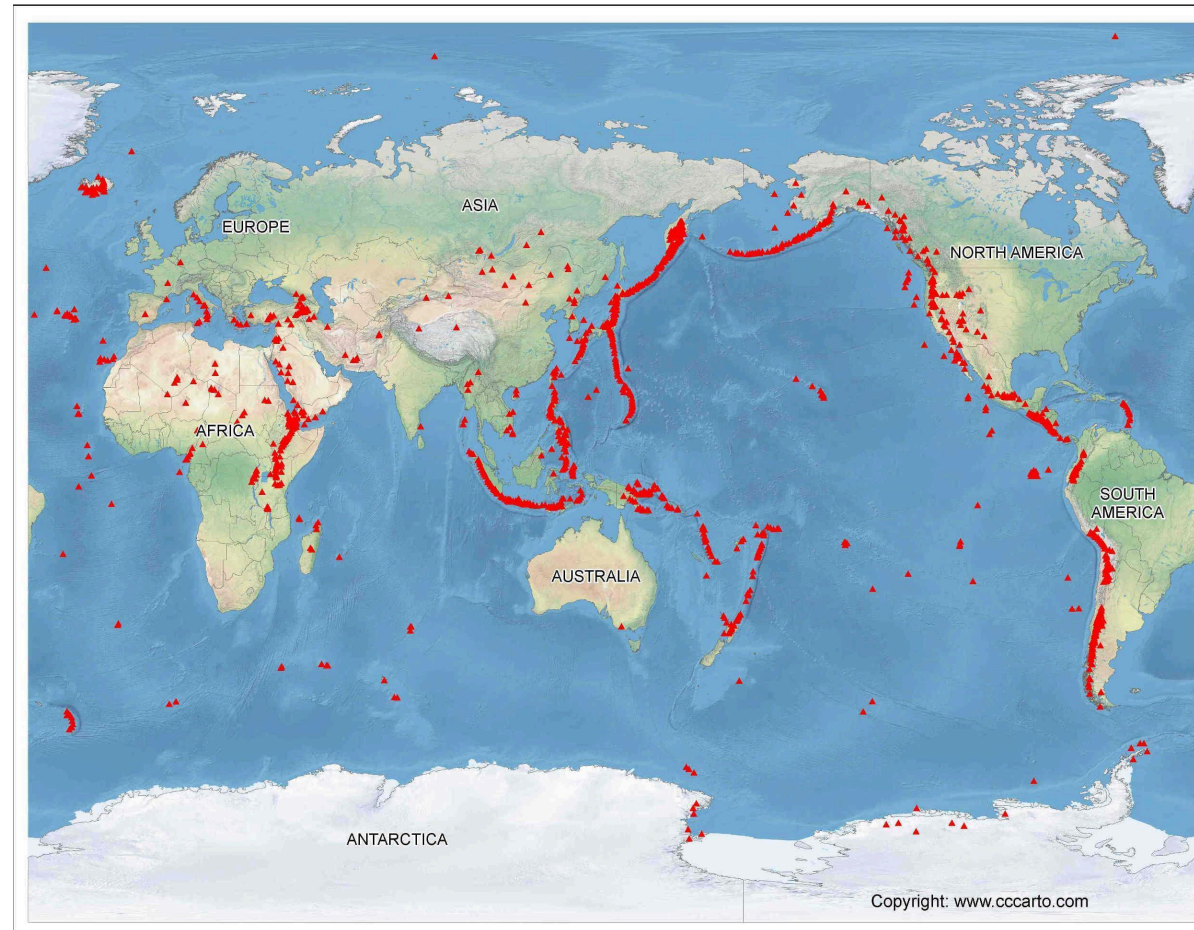


Fig. 3.3 Natural Hazard



Fig. 4.1 Question 4

Distribution of Volcanoes on Earth

**Legend** -Volcano

[Turn Over]

Fig. 4.2 Question 4

Shishaldin, a volcano spewing ash and volcanic gas



BLANK PAGE

BLANK PAGE

Copyright Acknowledgements:

Question 1 Fig. 1.1:

https://www.facebook.com/TampNorth/photos/a.964528186951627/6978632938874425/?type=3&eid=ARDHIT1QW4U9oyRDa4doz5VhcDOutrijCKnblsPzH-6ErX39wOVW9OOG3LocQnyYEPsnT_RGi9EMAXv1y&locale=ms_MY&_rd=1

Question 1 Fig. 1.2: <https://www.gardensbythebay.com.sg/en/plan-your-visit/gardens-map.html>

Question 1 Fig. 1.4: <https://www.la-accreditation.org.sg/post/bidadari-estate-to-have-green-haven-with-lake-and-trails>

Question 2 Fig. 2.1:

<https://community.tableau.com/s/question/0D54T00000C6hczSAB/trade-flows-map-from-origin-to-destination-with-flow-intensity> (adapted)

Question 2 Fig. 2.2 and 2.3: <https://mize.tech/blog/ecotourism-101-ecotourism-examples-definition-best-practices/>

Question 3 Fig. 3.1: http://meteo.jcd.free.fr/index_GB.h

Question 3 Fig. 3.2: <https://education.nationalgeographic.org/resource/deforestation/>

Question 3 Fig. 3.3:

<https://www.scmp.com/week-asia/explained/article/3041783/explained-asias-deadliest-eruptions-and-four-volcanoes-watched>

Question 4 Fig. 4.1: <https://www.cccarto.com/volcano/#1/-22/6>

Question 4 Fig. 4.2: <https://education.nationalgeographic.org/resource/plate-tectonics-volcanic-activity/>