

Name: \_\_\_\_\_ ( ) Class: \_\_\_\_\_



**ANGLICAN HIGH SCHOOL  
PRELIMINARY EXAMINATION  
SECONDARY 4 CORE GEOGRAPHY 2022**

**S4**

**GEOGRAPHY**

**2236/01**

Paper 1  
**Section B**

**26<sup>th</sup> August 2022**

Additional Materials: 1 Insert

**1 hour 40 minutes**

Candidates answer on the Question Paper.

<b>Section B</b>		<b>25 marks</b>
------------------	--	-----------------

This document consists of **12** printed pages and **1** Insert

**[Turn over**

## Section B

Answer **one** question from this section.

- 2 (a)** Study Table 3, which shows the number of tourist arrivals in the different regions from 2000 to 2020.

**Table 3**

	<b>Tourist Arrivals (millions)</b>		
<b>Regions</b>	<b>2000</b>	<b>2010</b>	<b>2020</b>
Europe	390	527	717
East Asia/Pacific	116	231	438
Americas	134	195	284
Africa	27	46	75
Middle East	19	37	69
South Asia	6	11	19
World	692	1,047	1,602

Using Table 3, describe the trend in the number of tourist arrivals in the different regions from 2000 to 2020.

.....

.....

.....

.....

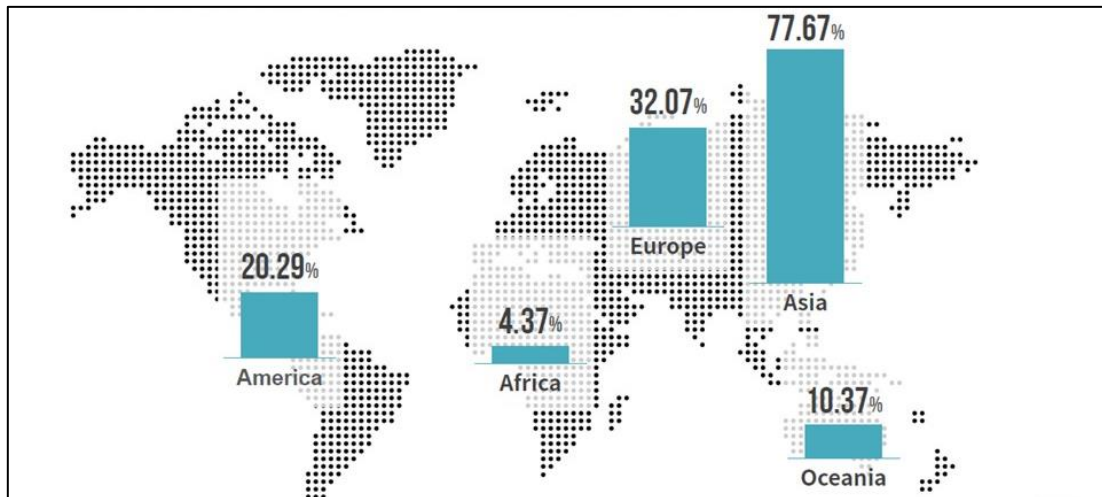
.....

.....

.....

.....[4]

- (b) Study Fig. 4, which shows China's outbound travel destinations.



**Fig. 4**

Comment on the China's outbound travel destinations in Fig. 4.

.....

.....

.....

.....

.....

.....

.....

.....

.....

.....[4]

- (c) Study Fig. 5 (Insert 1), which shows some tourist attractions at Halong Bay, a tourist area in north east Vietnam and Fig.6, which shows an extract on tourism in Halong Bay.

The Halong bay is a UNESCO World Heritage site which consists of a dense cluster of some limestone islands each topped with thick jungle vegetation, rising spectacularly from the ocean. Several of the islands are hollow, with enormous caves. There are two bigger islands, Tuần Châu and Cát Bà, that have permanent inhabitants, as well as tourist facilities including hotels and beaches. There are a number of beautiful beaches on the smaller islands. A community of around 1,600 people live on Halong Bay in four fishing villages: Cua Van, Ba Hang, Cong Tau and Vong Vieng in Hung Thang ward, Halong city. They live on floating houses and are sustained through fishing and marine aquaculture where they earned a living from tourists.

**Fig. 6**

Use the information in Fig. 5 (Insert 1) and Fig. 6 to explain the factors that attract tourists to Halong Bay.

[4]

**(d)** Using examples, explain the negative economic impacts of tourism.

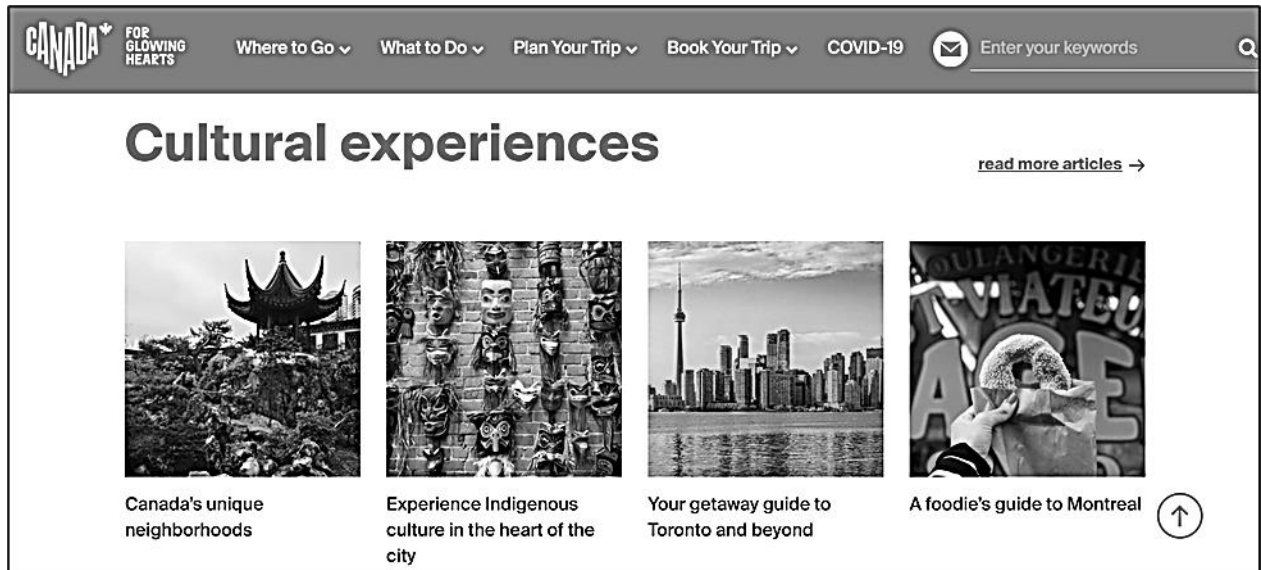
.....[S

- (e) "Planning authorities have the greatest responsibility in managing the impacts of tourism."

How far do you agree with this statement? Use examples to support your answer.

.....[8]

- 3 (a) Study Fig. 7, which shows information on the official Canadian Tourism website.



**Fig. 7**

Using information from Fig. 7, suggest the role of media in promoting tourism in Canada.

.....

.....

.....

.....

.....

.....

.....[3]

- (b) Study Fig. 8, which shows the international tourist arrivals in 2020 and Table 4, which shows the change in Gross Domestic Product (GDP) and change in jobs due to tourism in 2020.

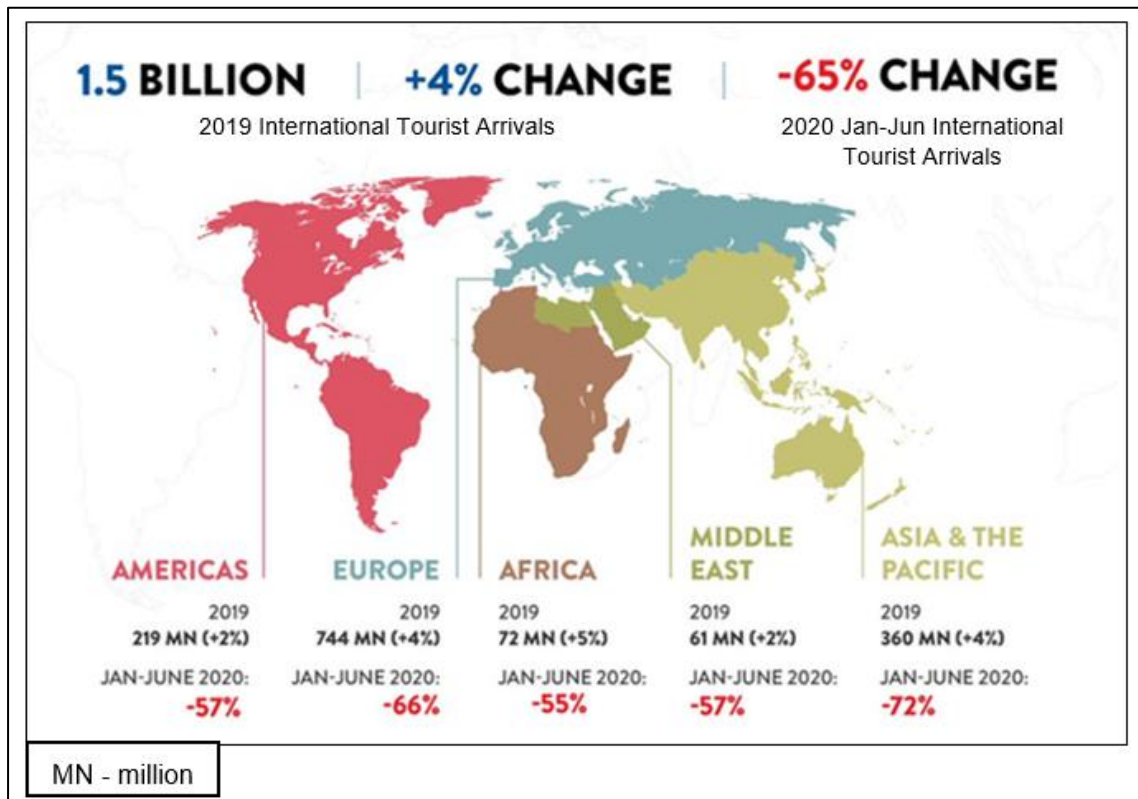


Fig. 8

Table 4

Tourism revenue change and change in jobs due to tourism from 2019 to 2020.

	Tourism revenue change (in billion USD)	Change in unemployment rate (due to tourism) from 2019 - 2020 (%)
Americas	- \$910	+ 7.4
Europe	- \$1,126	+ 10.3
Africa	- \$83	+ 6.9
Middle East	- \$138	+ 11.7
Asia & the Pacific	- \$1,645	+ 14.8

Using information from Fig. 8 and Table 4, comment on the tourism revenue change and change in unemployment rates in relation to international tourist arrivals in 2020.

.....

.....

.....

[Turn over

[illegible]

```
graph TD; A((Socio-cultural impacts in Bali, Indonesia)) --- B((High risk of petty crime (e.g. pickpockets) at tourist attractions)); A --- C((Preservation of the Pakerisan Valley as a UNESCO World Heritage Site)); A --- D((Cultural tourism evolving to mass tourism)); A --- E((Rituals are unified and homogenized to fit tourists' itinerary));
```

High risk of petty crime (e.g. pickpockets) at tourist attractions

Preservation of the Pakerisan Valley as a UNESCO World Heritage Site

**Socio-cultural impacts in Bali, Indonesia**

Cultural tourism evolving to mass tourism

Rituals are unified and homogenized to fit tourists' itinerary

Anglican High School Humanities Department 2022  
2236/01/S4 PRELIMINARY EXAMINATION /2022



Using Fig. 9, assess the socio-cultural impacts of tourism in Bali, Indonesia.

.....

.....

.....

.....

.....

.....

.....

.....

.....

.....[5]

**(e)** 'Coastal areas are mainly used for fisheries and aquaculture.'

To what extent do you agree with this statement? Use examples to support your answer.

.....

.....

.....

.....

.....

.....

.....

.....

.....

.....

.....

.....

.....

.....

.....

.....

.....

.....

.....

.....

.....

Anglican High School Humanities Department 2022  
2236/01/S4 PRELIMINARY EXAMINATION /2022

## Additional page

If you use the following lined pages to complete the answer(s) to any question(s), the question number(s) must be clearly shown.

This image shows a full page of white paper with horizontal dotted lines. The lines are evenly spaced and run across the width of the page, providing a guide for handwriting practice. There are no margins, text, or other markings on the page.

## Additional page

If you use the following lined pages to complete the answer(s) to any question(s), the question number(s) must be clearly shown.

This image shows a full page of white paper with horizontal dotted lines. The lines are evenly spaced and run across the width of the page, providing a guide for handwriting practice. There are no margins, text, or other markings on the page.

**Acknowledgements:**

Table 3 - [https://www.researchgate.net/figure/Forecasts-of-International-Tourist-Arrivals-Worldwide-and-by-Region-2010-2020\\_tbl1\\_321704375](https://www.researchgate.net/figure/Forecasts-of-International-Tourist-Arrivals-Worldwide-and-by-Region-2010-2020_tbl1_321704375)

Fig. 4 - <https://www.ipsos.com/en/chinese-travel-and-tourism-growing>

Fig. 5 - <https://impresstravel.com/ti-top-island-beach-in-halong-bay/>

Fig. 6- adapted from <https://www.halongbaytours.com/destinations/halong-bay.html>

Fig. 7- - <https://us-keepexploring.canada.travel/>

Fig. 8 - <https://pbs.twimg.com/media/EiMV0SWWkAE39vE.jpg>

Table 4 - adapted from <https://www.c-mw.net/wp-content/uploads/2021/07/EIR2020-Infographic-Map-RegionalPC-copy-scaled.jpg>