



**DUNMAN HIGH SCHOOL**  
Senior High Section

**PRELIMINARY EXAMINATION 2008**  
**Higher 2**

---

**GEOGRAPHY**

**9730/02**

Paper 2 Human Geography

Friday

19 September 2008

3 hours

---

INSERT

**READ THESE INSTRUCTIONS FIRST**

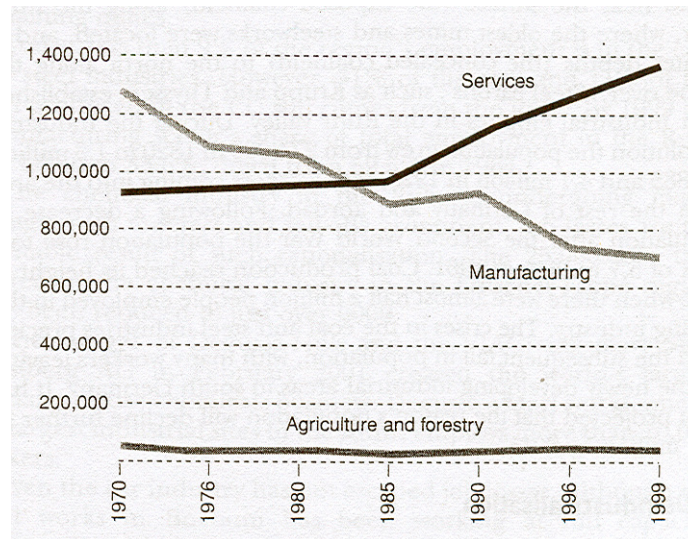
This Insert contains all the Figures referred to in the question paper.

---

This document consists of **4** printed pages

**[Turn over**

### Employment in the Ruhr region, Germany between 1970 and 1999



**Fig. 1 for Question 1**

### Population values for the five continents in 1985 and 1995.

	1985			1995		
Continent	B.R.	D.R.	Fertility Rate	B.R.	D.R.	Fertility Rate
Africa	45	16	6.3	42	18	5.9
Asia	28	10	3.7	25	8	3.1
Europe	18	10	1.8	12	11	1.6
N. America	15	8	1.8	16	9	2.0
S. America	31	8	4.2	27	7	3.2
B.R. = birth rate per 1000 people per year D.R. = death rate per 1000 people per year Fertility Rate = average number of children born to a woman during her life time						

**Fig. 2 for Question 2**

### Distribution of squatter settlements in Lima in 2004

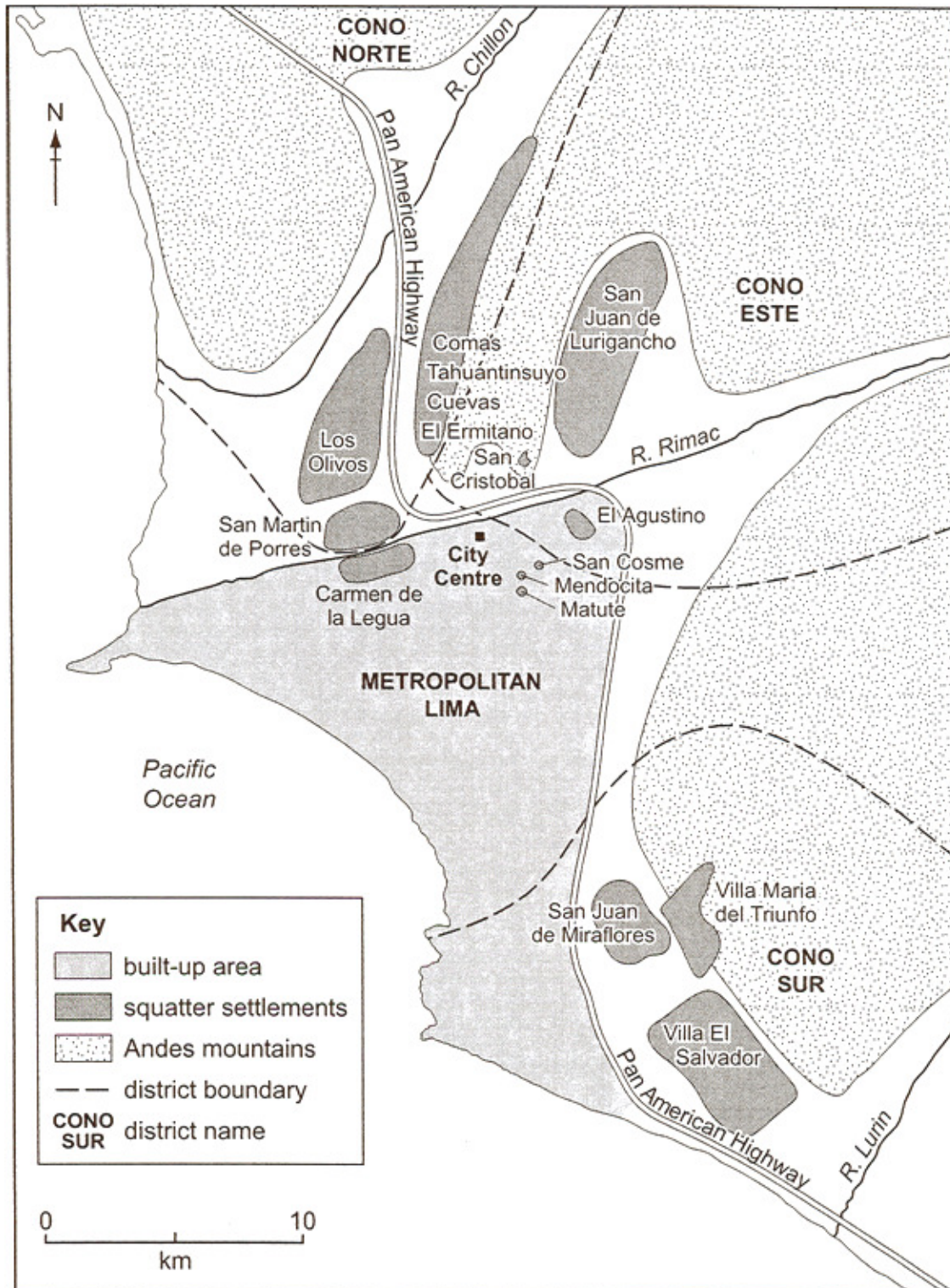
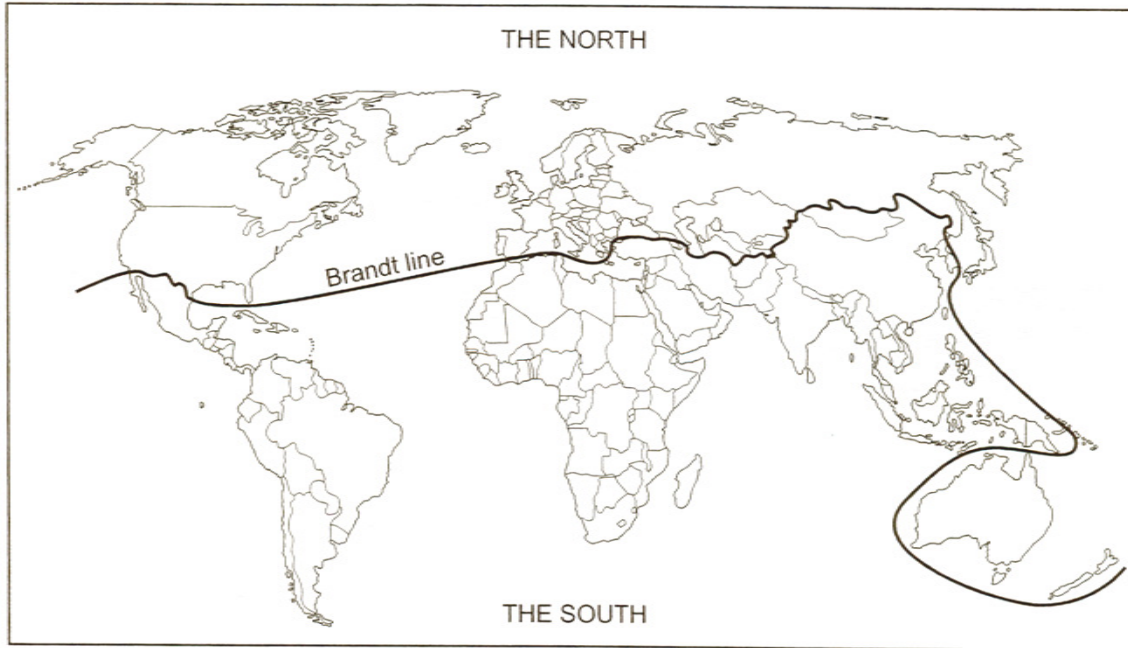


Fig. 3 for Question 3

### The North-South divide



**Fig. 4 for Question 4**

- End of Paper -