



MERIDIAN JUNIOR COLLEGE
PRELIMINARY EXAMINATION
Higher 2

JC2 H2 Geography

9751/02

Paper 2

20 September 2017

Insert

3 Hours

READ THESE INSTRUCTIONS FIRST

This Insert contains the Photograph and all the Figures referred to in the questions.

This document consists of 10 printed pages.

Resource for Question 1

Section of River in the Nature Reserve



Resource 2 for Question 1

Section of the Managed Channel



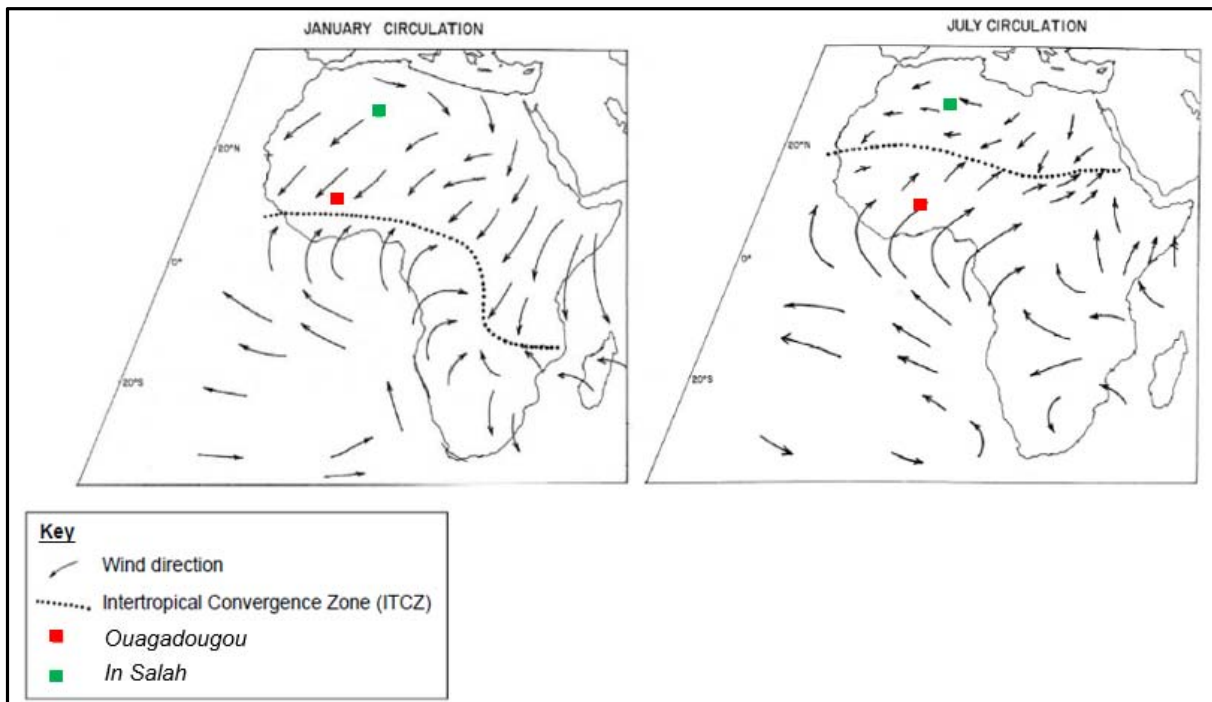
Resource 3 for Question 1

Data collected for Velocity of Rivers A and B

River A – Velocity (m/s)					River B – Velocity (m/s)			
Time	1	2	3	Average	1	2	3	Average
10.00	0.42	0.48	0.46	0.45	0.36	0.40	0.45	0.40
11.00	0.50	0.50	0.48	0.49	0.52	0.58	0.56	0.55
12.00	0.56	0.58	0.55	0.56	0.62	0.63	0.66	0.67
13.00	0.53	0.52	0.54	0.53	0.51	0.53	0.56	0.53
14.00	0.48	0.46	0.45	0.46	0.48	0.49	0.50	0.49

Resource 4 for Question 2

Wind direction over Africa in January and July



Resource 5 for Question 2
Mass Movement in In Salah (27.2°N)

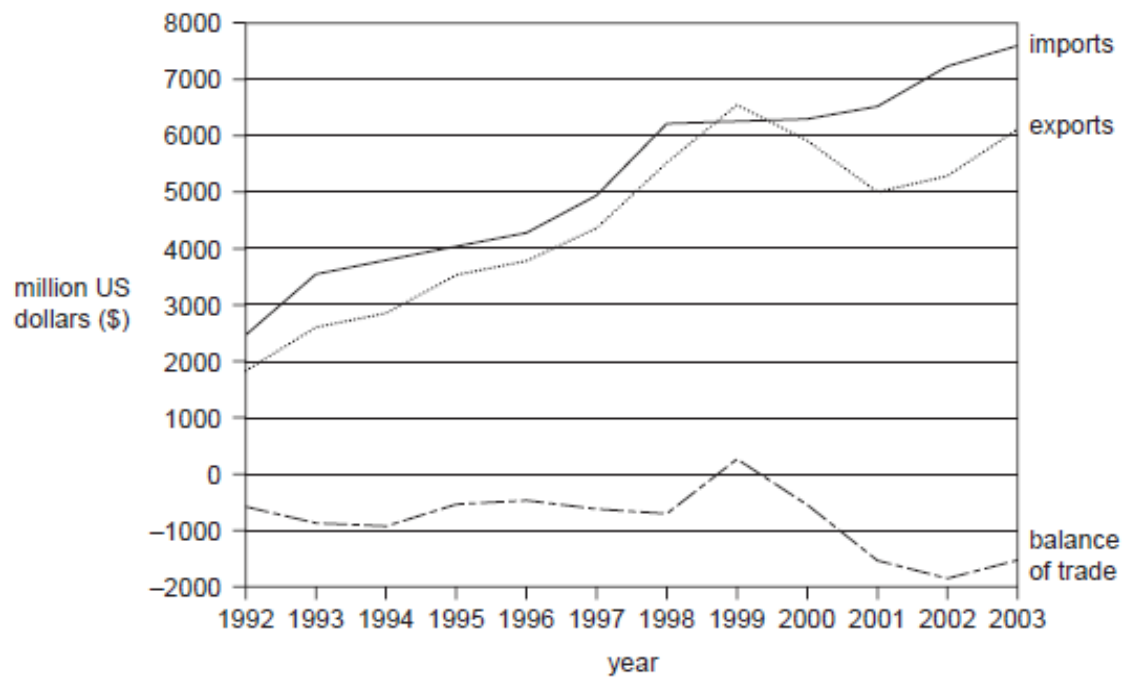


Mass Movement in Ouagadougou (12.4°N)



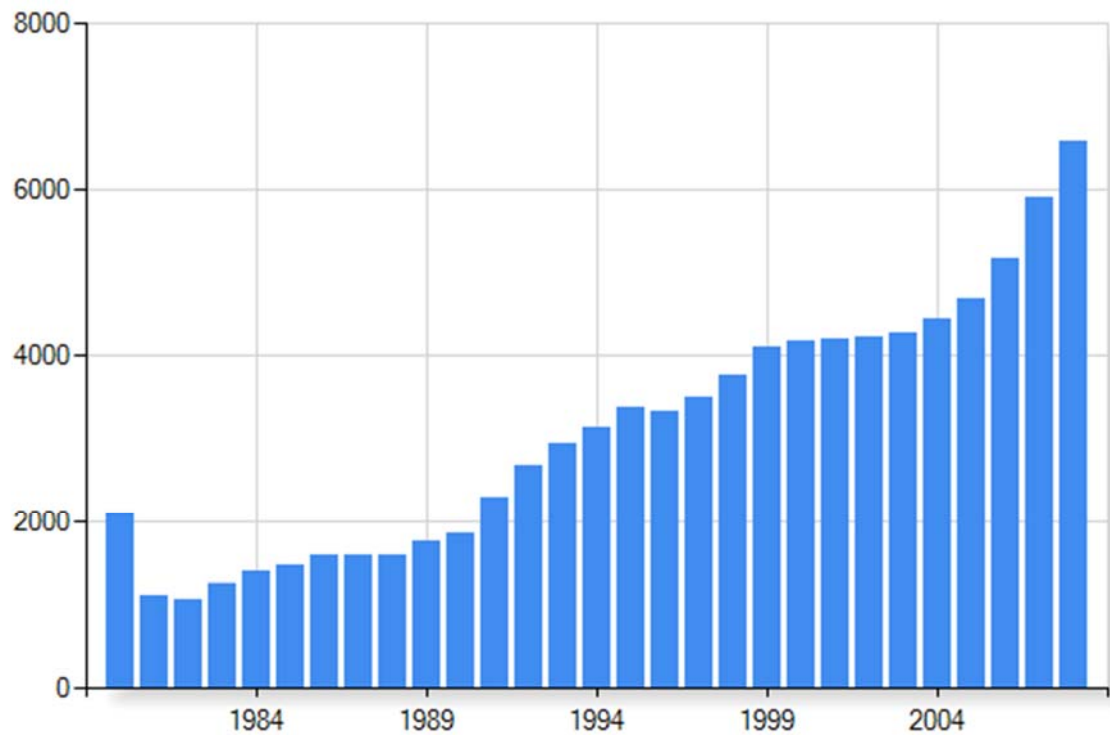
Resource 6 for Question 3

Imports, exports and the balance of trade, 1992-2003 for Costa Rica

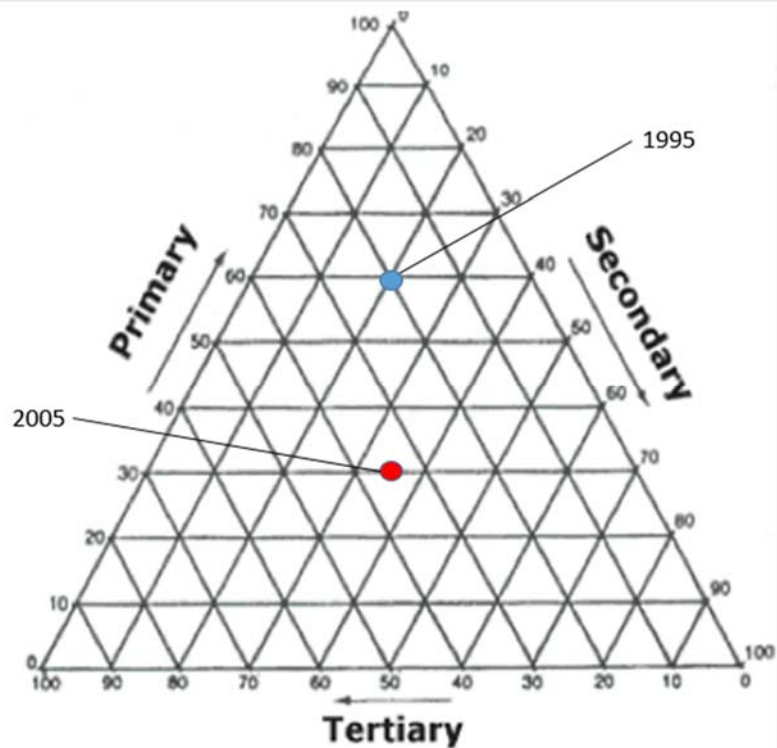


Resource 7 for Question 3

GDP per capita of Costa Rica from 1980 to 2008 (in US\$)



Resource 8 for Question 3
Employment Structure of Costa Rica



Resource 9 for Question 3
Location of Costa Rica

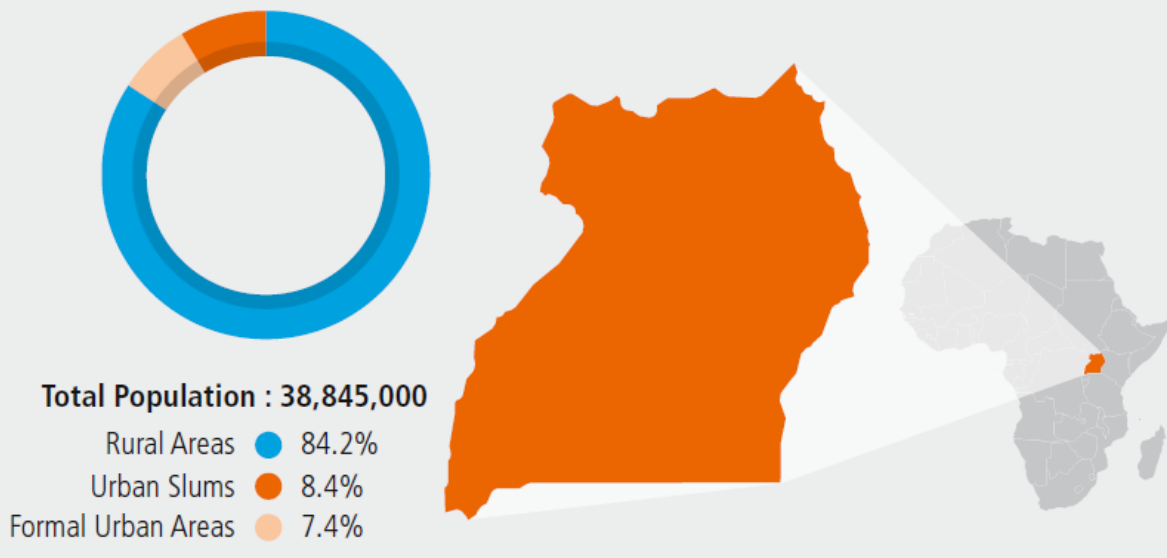


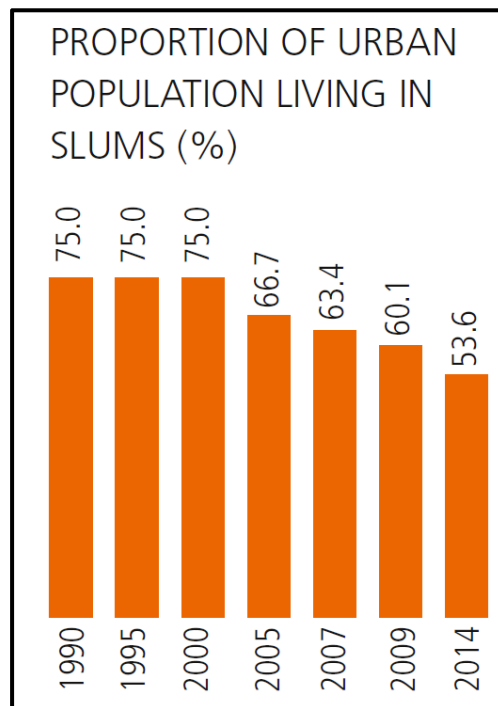
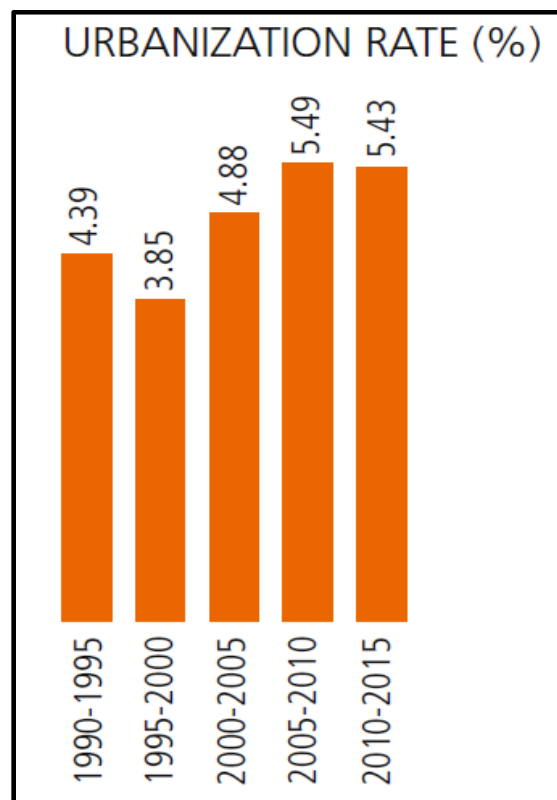
Resource 10 for Question 4

Population Distribution of Uganda by settlement

Uganda

Total Population (2014)	38,845,000
Population Living in Urban Areas	15.8% (6,124,000)
Urbanization Rate	5.43%
Urban Population Living in Slums	53.6%
Population of Urban Slum Dwellers	3,282,000



Resource 11 for Question 4**Proportion of Urban Population living in slums in Uganda****Resource 12 for Question 4****Urbanisation Rate of Uganda over time**

Resource 13 for Question 4

Katanga slum in Kampala, the capital city of Uganda

