

Name:		Index Number:		Class:	
-------	--	---------------	--	--------	--



**DUNMAN HIGH SCHOOL**  
**Preliminary Examinations**  
**Year 6**

---

GEOGRAPHY

9730

(Higher 2)

**Mon 23 Sept 2013**  
**3 hours**

Paper 2

Additional Materials:  
Answer Paper

---

INSERT 1

**READ THESE INSTRUCTIONS FIRST**

This Insert contains all the Figures referred to in the question paper.

---

This document consists of **5** printed pages

**[Turn over**

Fig.1 for Question 1

## Top TNCs in banking and financial services, 2011

TNC	country of origin	total assets in US\$ billions	number of countries where the TNC operates
Citigroup	USA	1300	77
UBS	Switzerland	1200	48
Allianz Group	Germany	1200	48
Mizuho Financial Group	Japan	1100	15
Crédit Agricole	France	1100	41
HSBC	UK	1000	48
Deutsche Bank	Germany	1000	40

Fig. 2a and Fig. 2b for Question 2

Fig. 2A for Question 3

Life expectancy, total fertility rate and natural increase rate for 25 large LEDCs, 1950–55

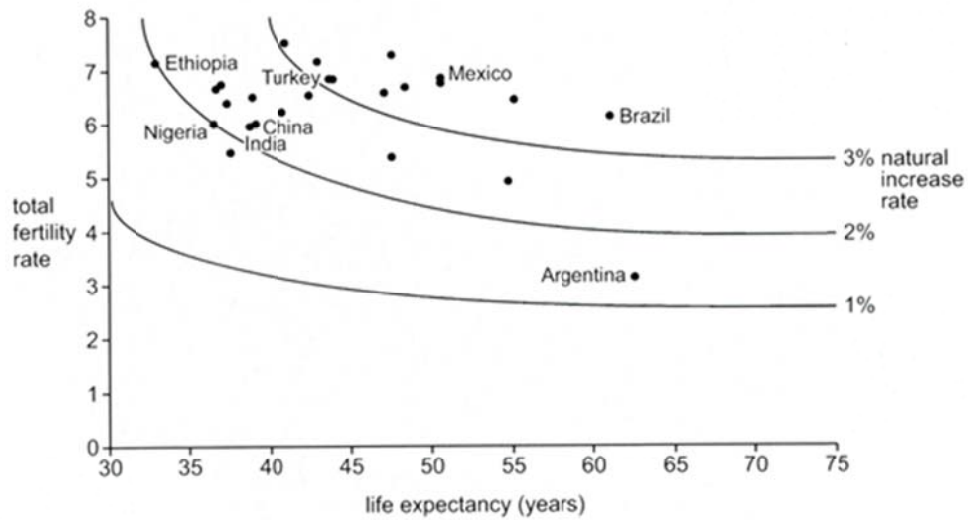


Fig. 2B for Question 3

Life expectancy, total fertility rate and natural increase rate for 25 large LEDCs, 1995–2000

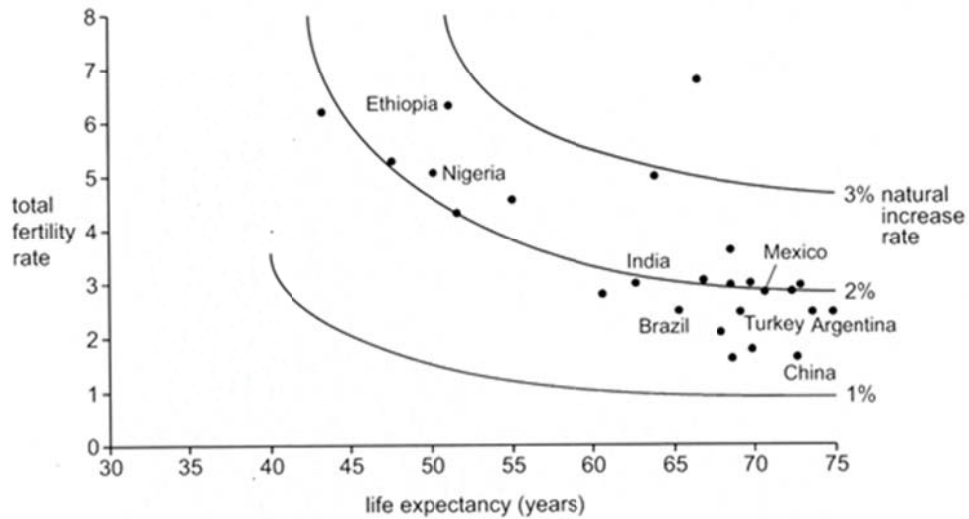
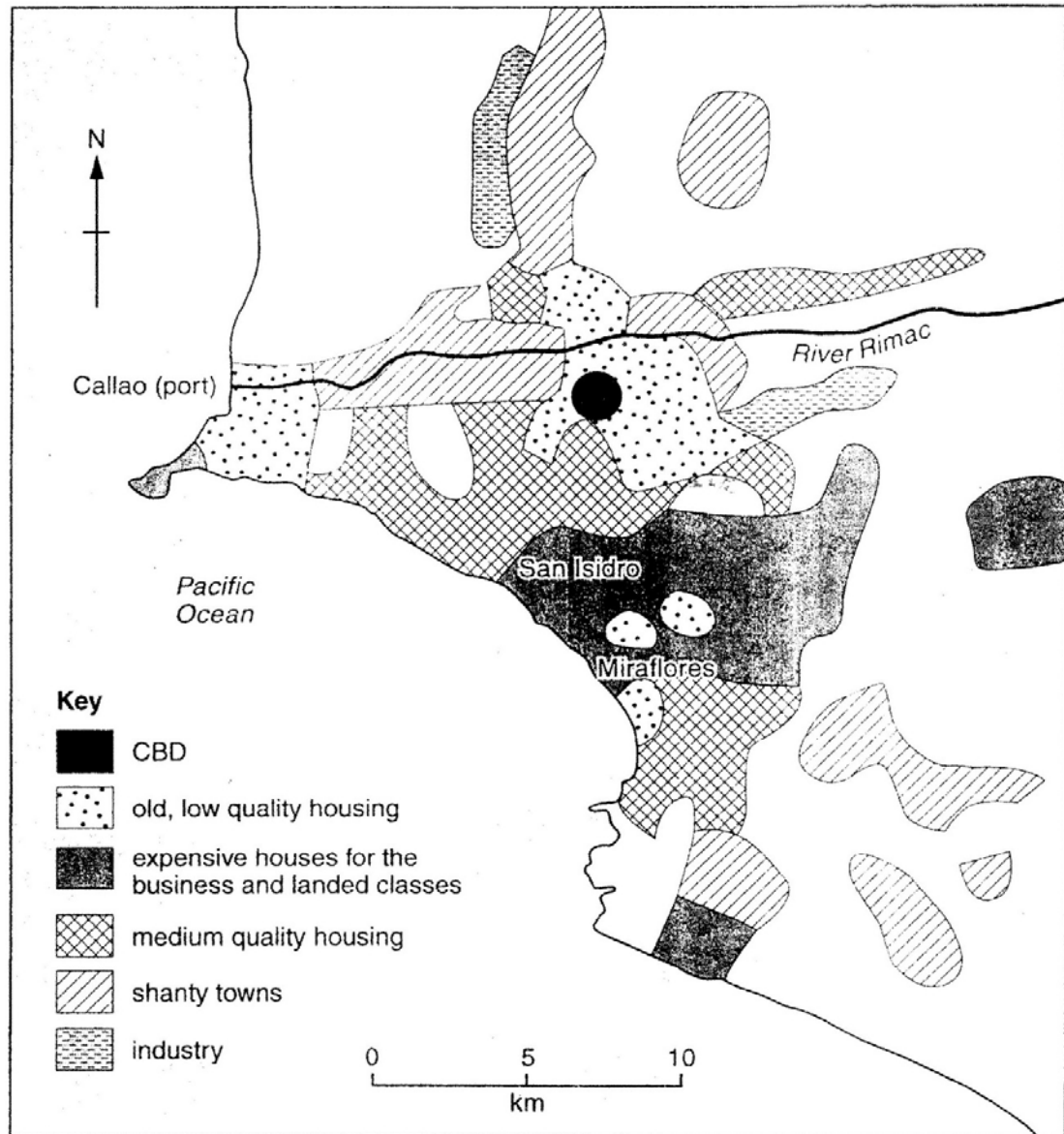


Fig. 3 for Question 3



Land use in Lima, a city in Peru, a LDC in South America.

Fig. 4 for Question 4

Migration Flows to/from City of Ryde in New South Wales, Australia, a DC from 2001-2006. Ryde City Population is 24,000 and is 25kilometers away from Sydney, a major city in Australia.

