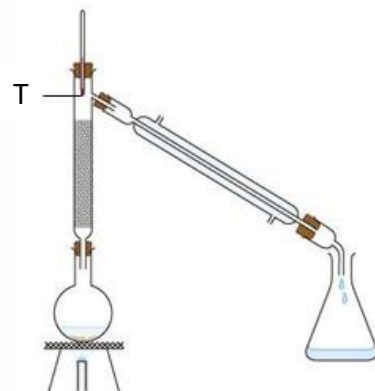
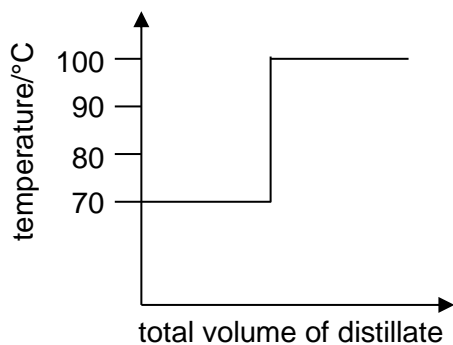


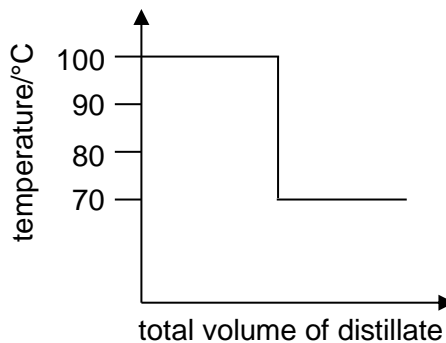
- 1 Nitrogen dioxide gas is almost twice as dense as nitrogen gas. A gas jar of nitrogen dioxide was placed on top of a gas jar of nitrogen gas with the open ends together. After half an hour, which of these statements would be true?
- A Both gases would not have mixed.
B The bottom gas jar contained nitrogen gas only.
C The top gas jar contained nitrogen dioxide gas only.
D Some of each gas would have moved into the other gas jar.
- 2 The diagram shows the apparatus used to separate hexane (boiling point 70°C) and water.



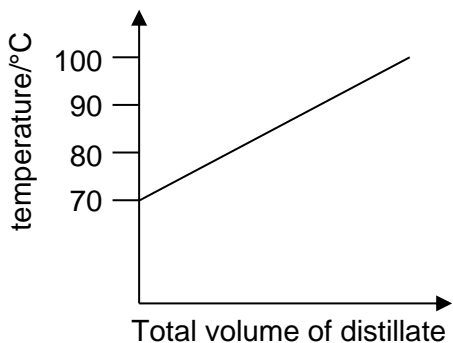
Which graph would be obtained if the temperature at point T was plotted against the total volume of distillate collected?



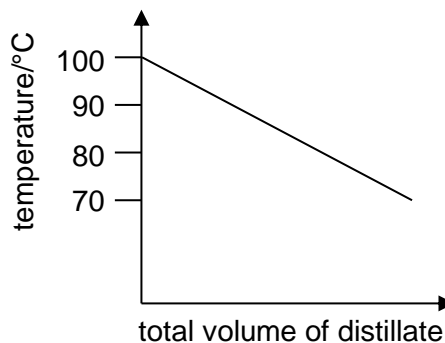
A



B

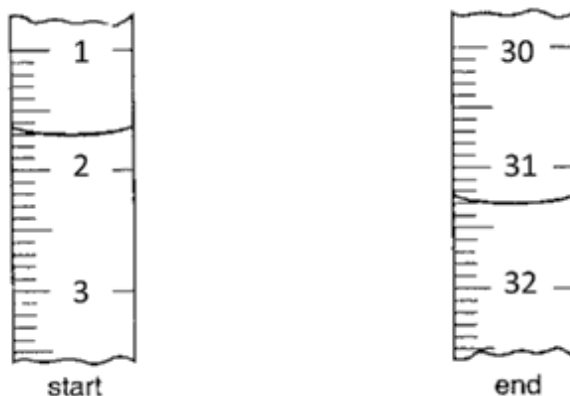


C



D

- 3 A student titrated 25.0 cm^3 of sodium hydroxide with hydrochloric acid. The diagram shows the volume of hydrochloric acid in the burette at the start and the end of the titration.



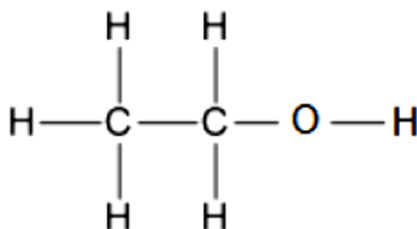
What volume of hydrochloric acid was added from the burette?

- A 29.00 cm^3
B 29.60 cm^3
C 31.30 cm^3
D 32.70 cm^3
- 4 The formulae of the ions of some elements are shown below:



Which of the following statements about these ions is correct?

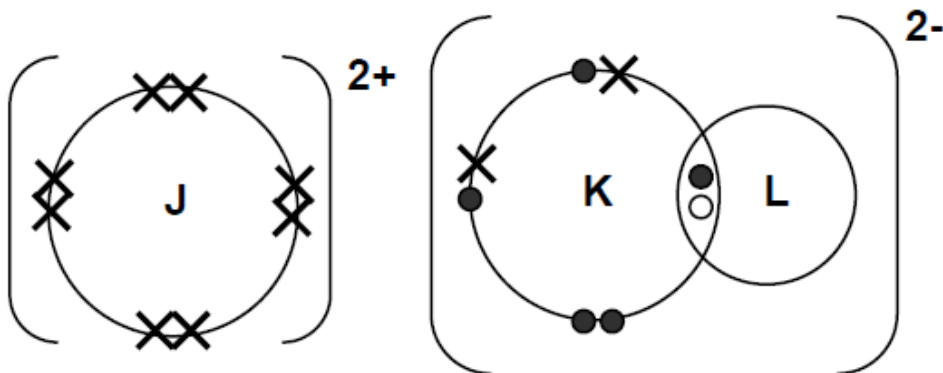
- A They all have more electrons than protons.
B They all have the same number of electron shells.
C They all have the same number of neutrons in their nuclei.
D They all have the same electronic structures as noble gases.
- 5 Ethanol has the structure shown.



How many of the electrons in a molecule of ethanol are **not** involved in bonding?

- A 4
B 6
C 8
D 10

- 6 J, K and L are three different elements in the Periodic Table. The 'dot and cross' diagram (showing only the valence electrons) of the compound formed between J, K and L is shown:



Which of the following statements is/are correct?

- 1 Element L is hydrogen.
- 2 Element J belongs to Group 2 of the Periodic Table.
- 3 Elements J, K and L are bonded together by ionic bonds only.

- A** 1 only
B 1 and 2
C 2 and 3
D 3 only

- 7 Elements X and Y form an ionic compound of formula X_3Y . What could the atomic numbers of X and Y be?

	X	Y
A	3	1
B	8	4
C	11	7
D	13	9

- 8 Magnesium oxide has a similar structure to that of sodium chloride. Which of the following statements is true?

- A** Magnesium oxide has a lower melting point than sodium chloride.
B Magnesium oxide and sodium chloride can conduct electricity in the molten state only.
C In a lattice structure, each magnesium ion is surrounded by six oxide ions while each oxide ion is surrounded by six magnesium ions.
D When magnesium reacts with oxygen, every mole of magnesium atoms loses a mole of electrons. Likewise, every mole of oxygen molecules loses a mole of electrons.

- 9 Which of the following reactions shows the amphoteric property of zinc oxide?

- A** $2ZnO + C \rightarrow 2Zn + CO_2$
B $ZnO + Mg \rightarrow MgO + Zn$
C $ZnO + 2HCl \rightarrow ZnCl_2 + 2H_2O$
D $ZnO + 2NaOH \rightarrow Na_2ZnO_2 + H_2O$

10 The following statements about dilute sulfuric acid are all correct.

- 1 It reacts with copper(II) oxide, forming a blue solution.
- 2 It turns anhydrous copper(II) sulfate from white to blue.
- 3 A white precipitate is formed when aqueous barium nitrate is added.
- 4 Addition of methyl orange shows that the solution has a pH value of less than 4.0.

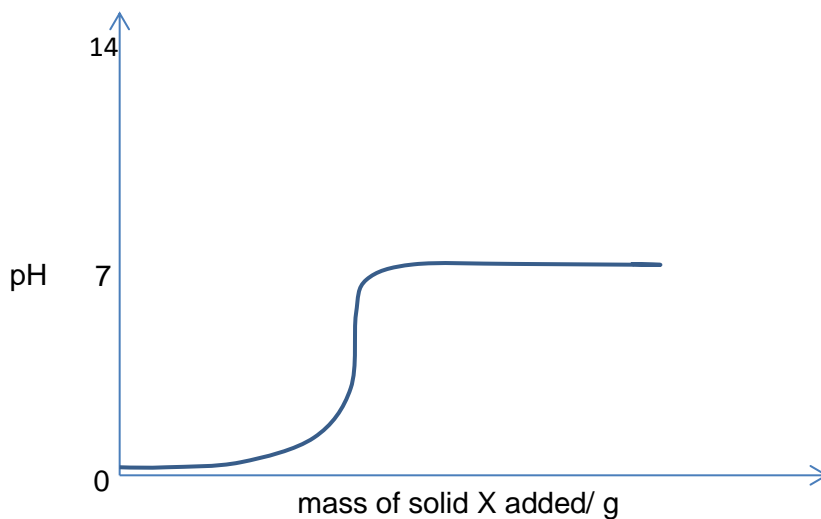
Which two statements confirm the acidic nature of the solution?

- A** 1 and 2
B 1 and 4
C 2 and 3
D 3 and 4

11 A titration method can be used to prepare aqueous potassium sulfate from potassium carbonate and dilute sulfuric acid. Which of the following conclusions from this information is correct?

- A** Potassium carbonate is an acidic salt.
B Potassium carbonate is insoluble in water.
C Potassium carbonate neutralises dilute sulfuric acid.
D Potassium carbonate reacts more vigorously than sodium carbonate with dilute sulfuric acid.

12 Solid X is gradually added to aqueous solution Y. The changes in pH are shown in the graph below.



What could X and Y be?

	X	Y
A	potassium carbonate	ethanoic acid
B	potassium oxide	ethanoic acid
C	sodium oxide	hydrochloric acid
D	zinc oxide	hydrochloric acid

- 13 An aqueous solution, Z, contains one cation and two anions. Some tests were carried out on the solution to determine the possible identities of the ions present. The observations of the tests carried out are recorded as follows:

Test 1	White precipitate forms when aqueous barium nitrate is added to solution Z.
Test 2	When solution Z is heated with aqueous sodium hydroxide and aluminium, a gas that turns moist red litmus blue is evolved.
Test 3	No visible change is observed when dilute hydrochloric acid is added to solution Z.

Which ions are likely to be present in solution Z?

- A Al^{3+} , Cl^- , SO_4^{2-}
B Al^{3+} , NO_3^- , SO_4^{2-}
C Pb^{2+} , NO_3^- , SO_4^{2-}
D Pb^{2+} , Cl^- , NO_3^-
- 14 G is a white powder that turns yellow upon heating and gives off a colourless gas which is slightly soluble in water to produce a solution with pH less than 7. The residue reacts with dilute nitric acid and the aqueous solution formed white precipitate that is soluble in excess aqueous ammonia. Which of the following could be the identity of G?
- A aluminium carbonate
B aluminium oxide
C zinc carbonate
D zinc oxide
- 15 One mole of a sample of hydrated sodium sulfide contains 162 g of water of crystallisation. What is the correct formula of this compound?
- A $Na_2S \cdot 3H_2O$
B $Na_2S \cdot 5H_2O$
C $Na_2S \cdot 7H_2O$
D $Na_2S \cdot 9H_2O$
- 16 When solid sodium hydrogencarbonate is heated strongly, the following reaction occurs.
- $$2NaHCO_3 (s) \rightarrow Na_2CO_3 (s) + H_2O (g) + CO_2 (g)$$
- What is the loss in mass when 33.6 g of solid sodium hydrogencarbonate is heated?
- A 10.8 g
B 12.4 g
C 21.2 g
D 24.6 g
- 17 1.36 g of aqueous solution $XC l_2$ reacts with 20.0 cm³ of 0.500 mol/dm³ aqueous sodium hydroxide to form $X(OH)_2$. Determine the relative atomic mass of X.
- A 65
B 136
C 201
D 272

- 18 Mixing 100 cm³ of 0.100 mol/dm³ aqueous lead(II) nitrate with 50 cm³ of 0.100 mol/dm³ dilute sulfuric acid resulted in the formation of a white precipitate. The precipitate is filtered off, dried, and weighed. What is the maximum possible mass of precipitate collected?

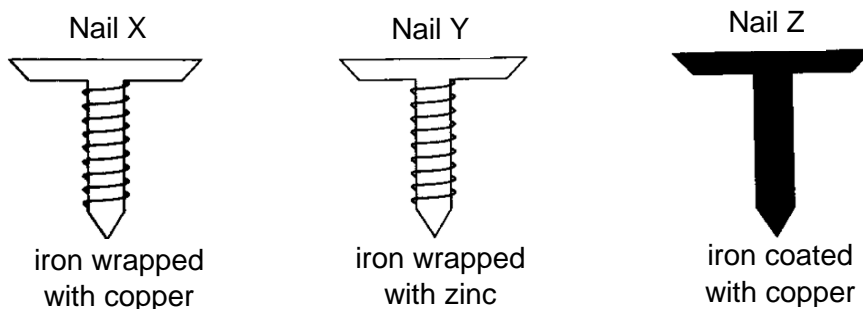
- A $\frac{50 \times 0.100 \times 303}{1000} g$
- B $\frac{100 \times 0.100 \times 303}{1000} g$
- C $\frac{150 \times 0.100 \times 303}{1000} g$
- D $\frac{150 \times 0.200 \times 303}{1000} g$

- 19 The table shows the solubility of some salts of metal M in cold water.

salt	solubility in cold water
carbonate	insoluble
chloride	insoluble
sulfate	insoluble

What is metal M?

- A barium
- B calcium
- C lead
- D zinc
- 20 An experiment was carried out to investigate the process of rusting in iron nails.

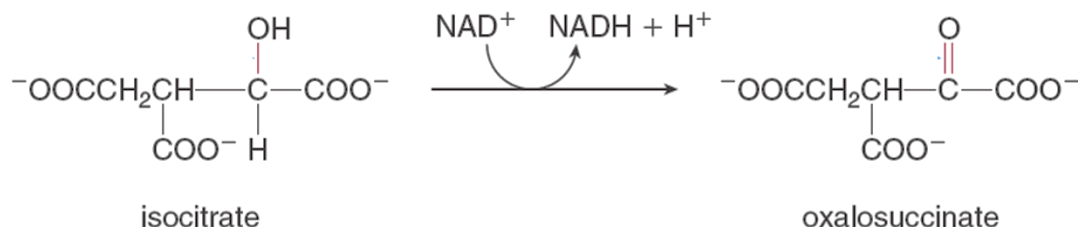


Which of the following statements is correct?

- A None of the nails rusted.
- B X rusted the fastest.
- C Y rusted the fastest.
- D Z rusted the fastest.

- 21 In which of the following reactions does the oxidation state of nitrogen show the greatest increase?
- A ammonia to nitrogen gas
 - B ammonia to ammonium ion
 - C nitrogen dioxide to nitric acid
 - D nitrogen monoxide to nitrogen dioxide

- 22 The Krebs Cycle is part of the pathway for the breakdown of glucose and all metabolites in the human body. The following equation depicts a reaction in the Krebs Cycle.



Which of the following statements is true?

- A Isocitrate is reduced by NAD^+ to form oxalosuccinate.
 - B NAD^+ serves as a reducing agent in the above reaction.
 - C NADH serves as an oxidising agent in the above reaction.
 - D The conversion of isocitrate to oxalosuccinate is an oxidation reaction.
- 23 What can the destruction of the ozone layer lead to?
- A The number of cases of skin cancer will increase.
 - B The number of flooded costal regions will increase.
 - C The number of hurricanes and typhoons will increase.
 - D The temperature of the oceans will decrease.
- 24 Element X is one of the components found in car fuels. It forms an oxide Y when burnt in car engines and gets further oxidised into Z when it is released in the atmosphere. Which of the following statements is true about the substances X, Y and Z?
- A Element X could be sulfur.
 - B Substances X, Y and Z exist naturally as gases.
 - C Substances Y and Z increase the pH of river water.
 - D Substance Z binds irreversibly to haemoglobin in blood cells resulting in respiratory difficulties in humans.
- 25 Waste gases from a coal-burning power station are passed through powdered calcium carbonate to reduce pollution to the atmosphere.

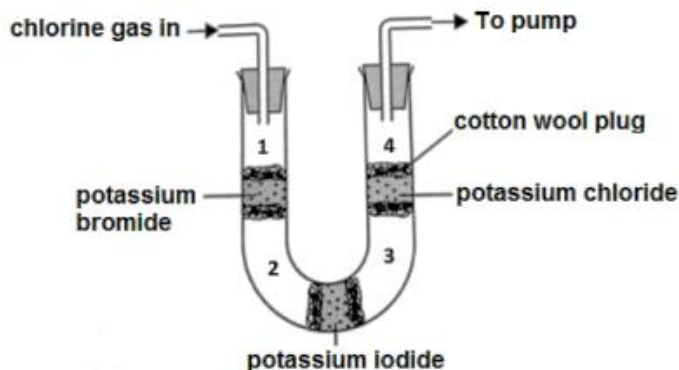
Which waste gas will **not** be removed by the powdered calcium carbonate?

- A carbon dioxide
- B carbon monoxide
- C nitrogen dioxide
- D sulfur dioxide

- 26 Ammonia is manufactured on a large scale by a reversible reaction in the Haber process. Which of the following is true about the reversible reaction?
- A A catalyst is not required for the reaction.
 - B A high temperature is required for the reaction.
 - C The reaction must have a low activation energy.
 - D The yield of ammonia will always be less than 100%.
- 27 Elements P, Q and R have the following properties:
- P reacts with Group 1 metals to form ionic compounds.
 - Q reacts with oxygen to form compounds with giant covalent structures and with very high melting and boiling points.
 - R reacts violently with acids to give off hydrogen gas.

What is the arrangement order of these elements across a period in the Periodic Table?

- A P, Q, R
 - B Q, R, P
 - C R, P, Q
 - D R, Q, P
- 28 Gaseous chlorine was passed through the apparatus set-up shown below. The apparatus was continuously heated throughout with a Bunsen flame and the observations were recorded.

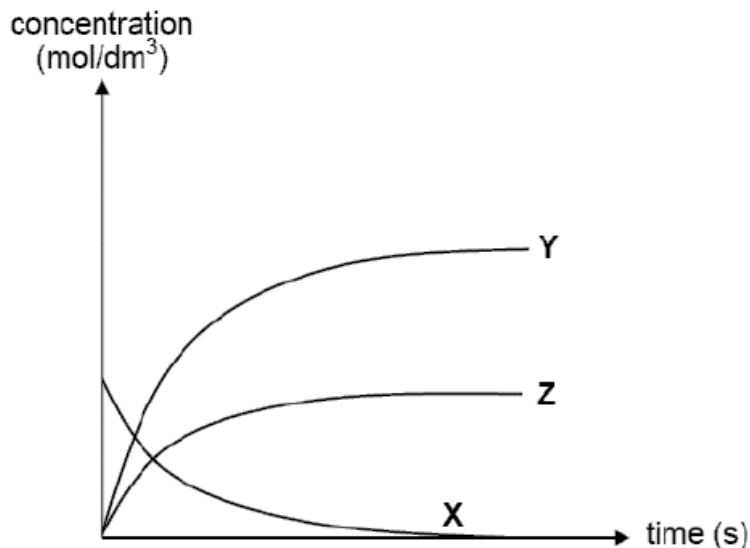


What would be the observations made at regions 1, 2, 3 and 4?

	region 1	region 2	region 3	region 4
A	brown gas	yellow-green gas	violet gas	yellow-green gas
B	violet gas	yellow-green gas	brown gas	violet gas
C	yellow-green gas	brown gas	violet gas	violet gas
D	yellow-green gas	brown gas	brown gas	brown gas

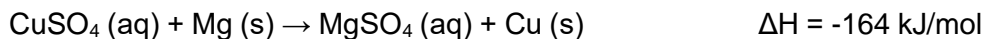
- 29 Phosphorus and nitrogen are both from Group 15 of the Periodic Table. Which ions would be produced if phosphine, PH_3 , was dissolved in water?
- A PH_3^+ , H^+
 - B PH_3^+ , OH^-
 - C PH_4^+ , H^+
 - D PH_4^+ , OH^-

- 30 The following graph shows the change in reactant and product concentrations with time during a chemical reaction.



Which equation represents the reaction shown in the graph?

- A $X \rightarrow Y + Z$
B $X \rightarrow 2Y + Z$
C $Z \rightarrow 2X + Y$
D $Z \rightarrow 2Y + X$
- 31 Copper(II) sulfate reacts violently in excess magnesium powder to give magnesium sulfate and copper metal, as shown.



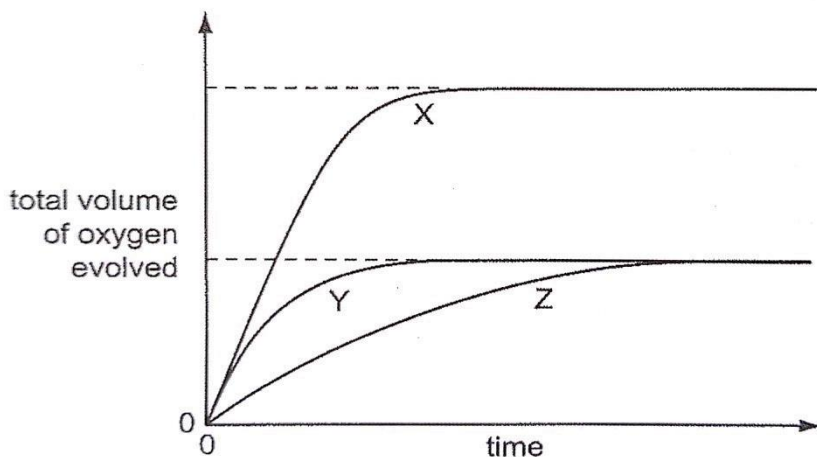
Which of the following will be observed when 25 cm³ of 0.05 mol/dm³ copper(II) sulfate is reacted with 2 g of magnesium powder?

- A 164 kJ of heat is absorbed in the reaction.
B 328 kJ of heat is released in the reaction.
C The temperature of the solution increases.
D The solution remains blue as there is insufficient magnesium powder.

- 32** Hydrogen peroxide solution is catalytically decomposed by manganese(IV) oxide to yield water and oxygen gas. To study the effect of the concentration of the solutions on the rate of reaction, the total volume of oxygen evolved was recorded against time.

Three experiments were performed using a fixed mass of catalyst but with:

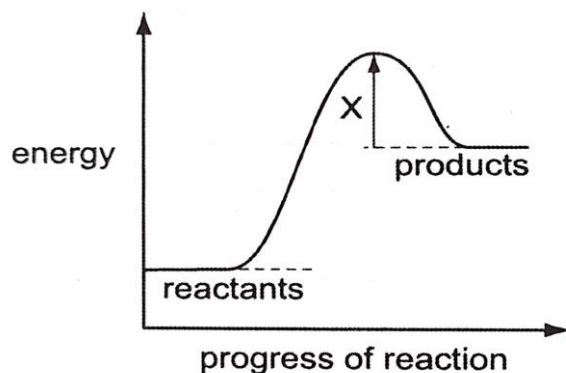
- (i) 50 cm³ of 2.0 mol/dm³ hydrogen peroxide.
- (ii) 100 cm³ of 1.0 mol/dm³ hydrogen peroxide.
- (iii) 100 cm³ of 2.0 mol/dm³ hydrogen peroxide.



On the graph above, which of the curves X, Y and Z relate to the solutions (i), (ii) and (iii)?

	(i)	(ii)	(iii)
A	X	Y	Z
B	X	Z	Y
C	Y	Z	X
D	Z	Y	X

- 33** The energy profile diagram shows the energy changes that occur as a reaction takes place.



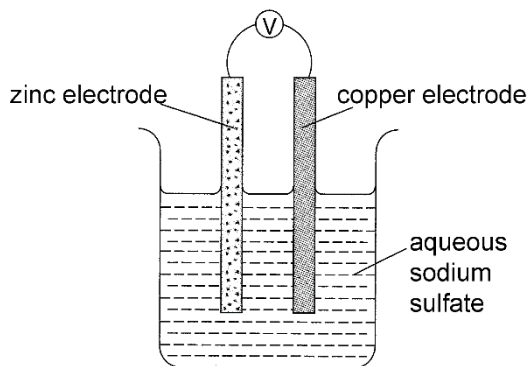
From the diagram, which statement about this reaction is correct?

- A** The reaction could be $\text{CH}_4 + 2\text{O}_2 \rightarrow \text{CO}_2 + 2\text{H}_2\text{O}$.
- B** The reaction has a negative ΔH value.
- C** X shows the activation energy for the reaction.
- D** X shows the activation energy for the reverse reaction.

- 34 During the electrolysis of a molten manganese salt, 27.5 g of manganese is deposited at the cathode by 2 moles of electrons. What is the formula of the manganese ion that has been discharged?

A Mn^{2+}
B Mn^{3+}
C Mn^{4+}
D Mn^{5+}

- 35 What happens when a current is drawn from the simple cell shown below?

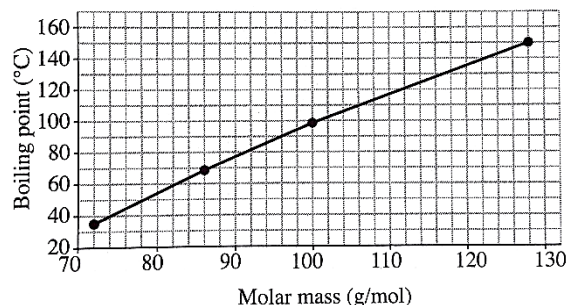


A Copper electrode dissolves to form copper(II) ions.
B Electrons flow from the copper to zinc electrode.
C Hydrogen gas is liberated at the zinc electrode.
D Zinc electrode dissolves to form zinc ions.

- 36 Which of the following statements about biofuel is true?

A Biofuel can be separated by simple distillation.
B Biofuel is an alternative fuel source to petroleum.
C Biofuel is formed from the remains of dead animals.
D Biofuel is the main feedstock for the petrochemical industry.

- 37 The following graph shows the relationship between the boiling points of some alkanes and their molar masses.



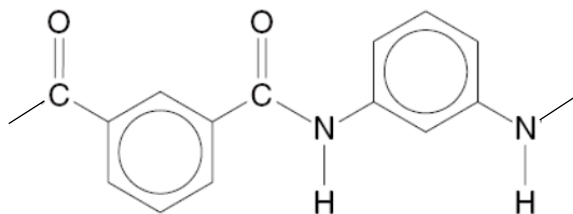
Which of the following is a likely explanation for the graph?

A Covalent bonds of alkane molecules become stronger as the molar mass increases.
B Higher the molar mass of the alkane, the stronger its carbon-carbon covalent bonds.
C Intermolecular forces of attraction get stronger as the alkane molecules get bigger.
D Structure of the alkane changes from simple molecular to giant molecular as the size of the molecules increases.

- 38 The reaction between a carboxylic acid, $C_xH_yCO_2H$ and an alcohol, $C_nH_{2n+1}OH$, produces an ester.

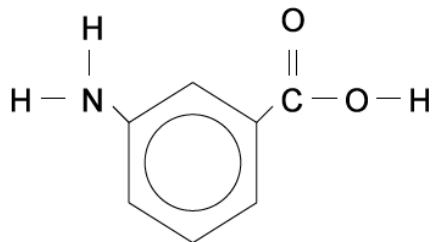
How many hydrogen atoms does one molecule of the ester contain?

- A $y+2n$
B $y+2n+1$
C $y+2n+2$
D $y+2n+3$
- 39 Nylon is sometimes used for electrical insulation. However, if there is a risk of high temperatures, then a polymer such as Nomex, with a higher melting point is used. The repeat unit of Nomex is shown below.

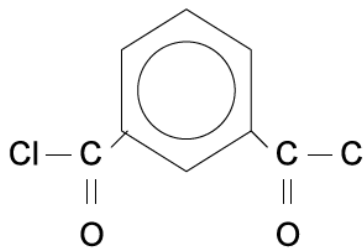


Which of the following is a possible monomer of Nomex?

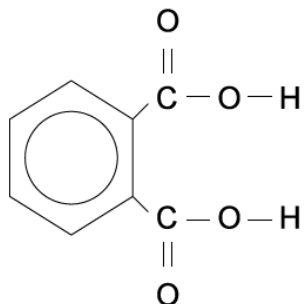
A



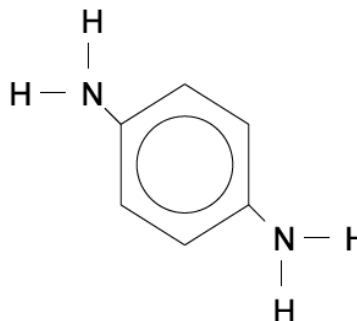
B



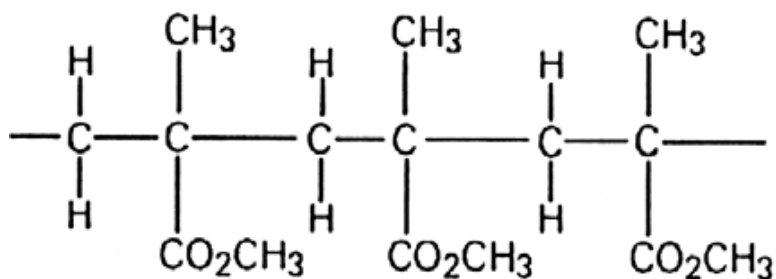
C



D

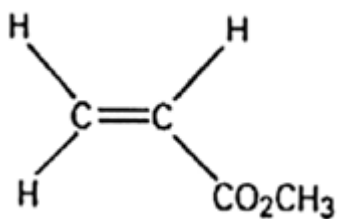


- 40 Poly(methyl methacrylate), PMMA, is a polymer used to make hard contact lenses. Part of the polymer structure is shown below.

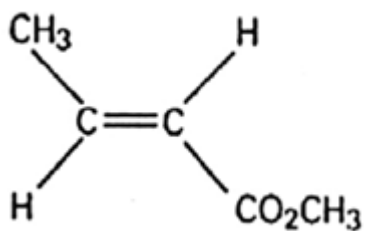


What is the structure of the monomer from which PMMA is made from?

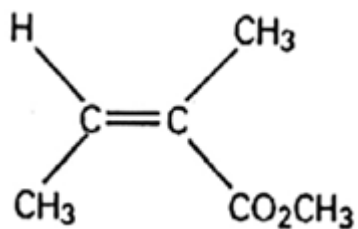
A



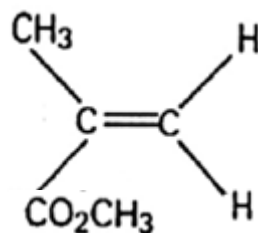
B



C



D



[illegible]

15