



Catholic Junior College
JC1 Mid-Year Examination
Higher 2

GEOGRAPHY

9173/02

Paper 1
Insert

26 June 2023
2 Hours

READ THESE INSTRUCTIONS FIRST

This Insert contains all the Resources referred to in the questions.

Resource 1 for Question 1
Entrance of Ang Mo Kio Hub



Resource 2 for Question 1

Number of Clinics, Health Food Stores and Food Establishments that the Students Counted

Clinic	<ol style="list-style-type: none"> 1. NTUC HEALTH DENTICARE (dental services)
Food establishments	<ol style="list-style-type: none"> 1. 1A CURRY PUFFS 2. A ONE SIGNATURE 3. A&W 4. AJISEN TANJIRO 5. AUNTIE ANNE'S 6. BENGAWAN SOLO 7. BOOST 8. BREADTALK 9. BURGER KING 10. BUTTER & CREAM 11. CHATERAISE 12. CHICHA SAN CHEN 13. CRAVE 14. 18 CHEFS 15. ICHIBAN BOSHI 16. JOLLIBEAN 17. LIHO 18. POPEYES 19. POLAR CAKES 20. NTUC FOODFARE
Health food	<ol style="list-style-type: none"> 1. EU YAN SANG 2. GUARDIAN 3. HOCK HUA TONIC 4. HERBAL TEA 5. KOONG WOH TONG 6. UNITY PHARMACY 7. ZTP

Resource 3 for Question 1

Survey Questions Used by the Students

Name: _____

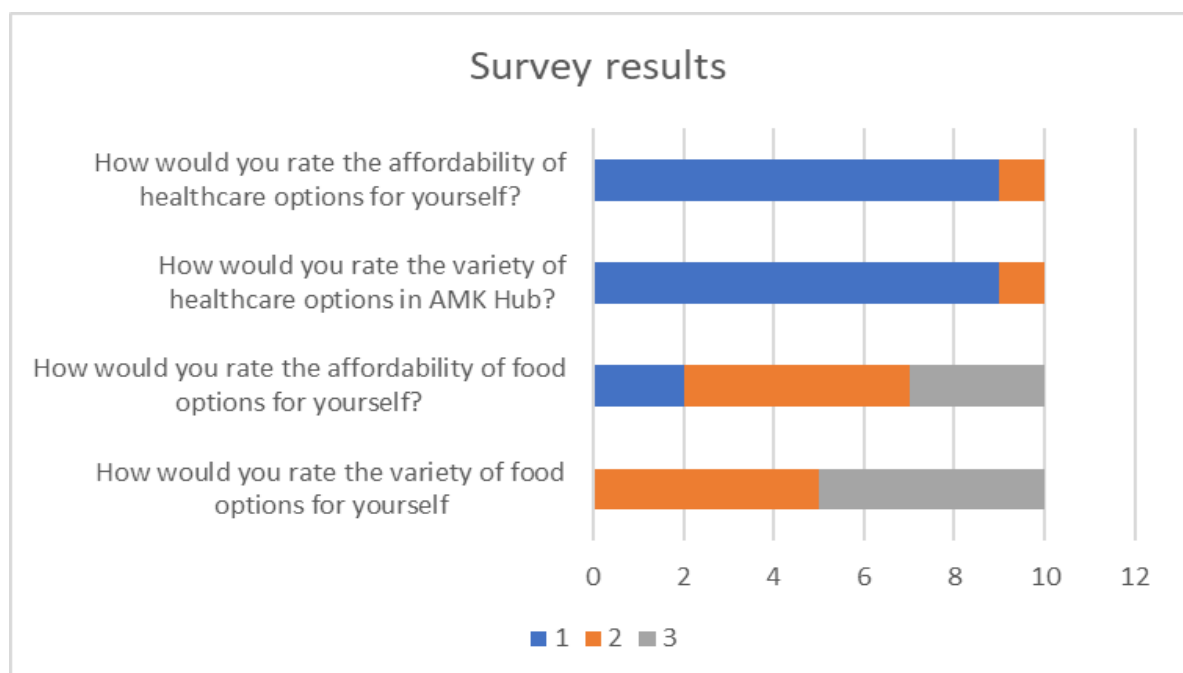
Age: _____

Please tick the option that best applies to you.

1. How often do you come to AMK Hub? (☐ at least once a week ☐ once a fortnight ☐ once a month)
2. What services or products do you need from AMK Hub? (☐ Food ☐ Clothes ☐ Healthcare ☐ Health products ☐ Others)
3. How would you rate the variety of food options for yourself? (☐ 1 nothing suitable for me ☐ 2 some are suitable for me ☐ 3 very suitable for me)
4. How would you rate the affordability of food options for yourself? (☐ 1 I cannot afford ☐ 2 moderately priced ☐ 3 Very cheap)
5. How would you rate the variety of healthcare options in AMK Hub? (☐ 1 nothing available ☐ 2 a few are available ☐ 3 a good range to cater to my healthcare needs)
6. How would you rate the affordability of healthcare options for yourself? (☐ 1 I cannot afford ☐ 2 moderately priced ☐ 3 Very cheap)

Resource 4 for Question 1

Survey Results

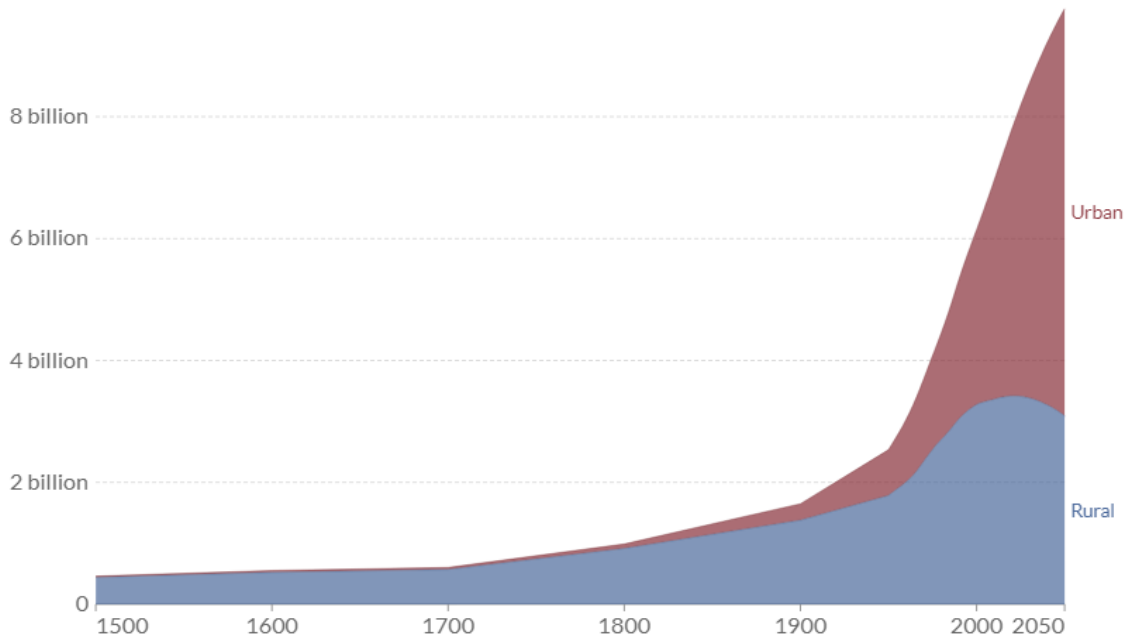


Resource 5 for Question 2

Global Urban and Rural Population from 1500 to 2050 (projected)

Urban and rural population projected to 2050, World, 1500 to 2050

Total urban and rural population, given as estimates to 2016, and UN projections to 2050. Projections are based on the UN World Urbanization Prospects and its median fertility scenario.



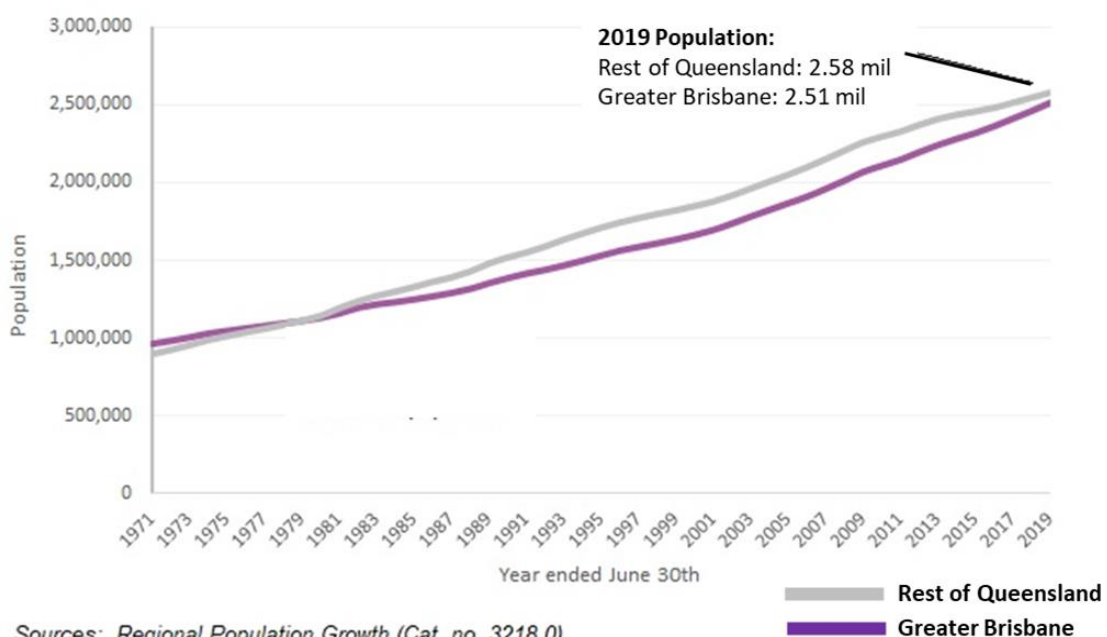
Source: OWID based on UN World Urbanization Prospects 2018 and historical sources (see Sources)

OurWorldInData.org/urbanization • CC BY

Resource 6 for Question 2

Population of Greater Brisbane and Rest of Queensland (1971-2019)

Population of Greater Brisbane and Rest of Queensland, 1971–2019

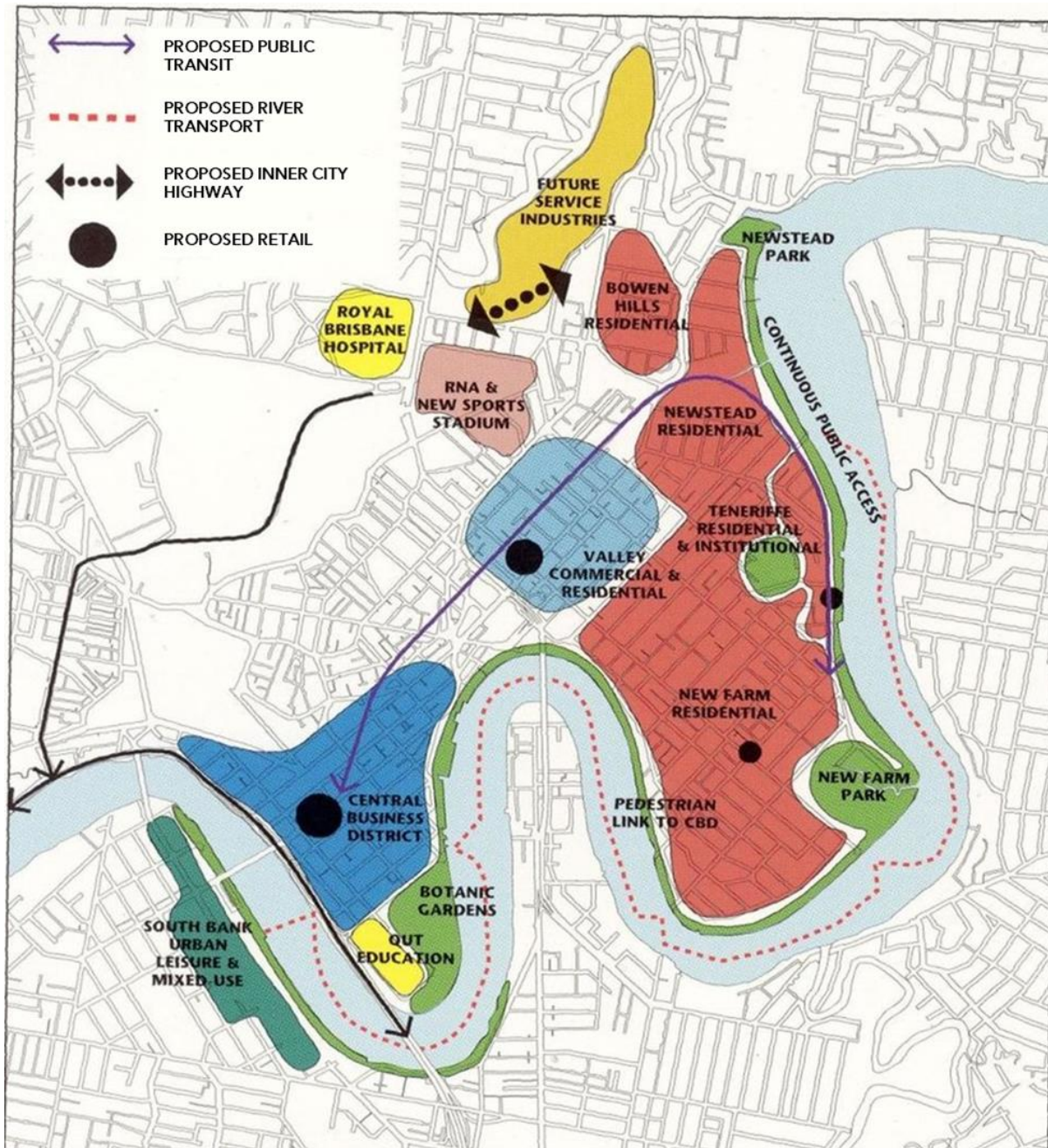


Sources: Regional Population Growth (Cat. no. 3218.0)

Australian Historical Population Statistics (Cat. no. 3105.0.65.001)

Resource 7 for Question 2

Master Plan for Brisbane's Urban Reimaging (1996)



In the late 1980's Brisbane was struggling with economic stagnation, urban decay and crime creating an exodus of residents and businesses to the suburban fringe. In 1991, the Urban Renewal Taskforce was established under a tri-governmental partnership and developed a masterplan to revitalising derelict industrial areas in Brisbane.